

# Identifying polygons

## Grade 3 Geometry Worksheet

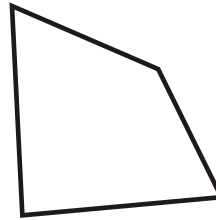
---

Classify each polygon as a square, rectangle, parallelogram, irregular quadrilateral, pentagon, irregular pentagon, hexagon or irregular hexagon.

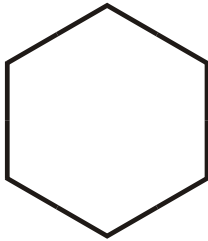
1)



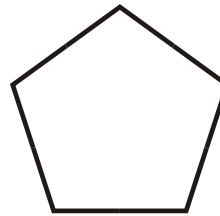
2)



3)




4)



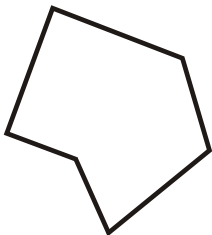
5)




6)



7)



8)



# Identifying polygons

## Grade 3 Geometry Worksheet

---

Classify each polygon as a square, rectangle, parallelogram, irregular quadrilateral, pentagon, irregular pentagon, hexagon or irregular hexagon.

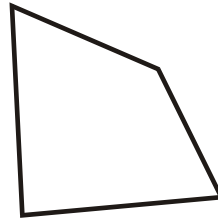
1)



Rectangle

---

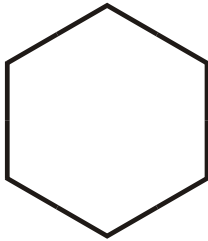
2)



Irregular Quadrilateral

---

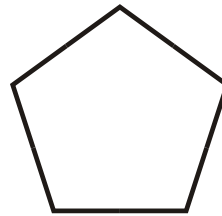
3)



Regular Hexagon

---

4)



Regular Pentagon

---


5)



Parallelogram

---

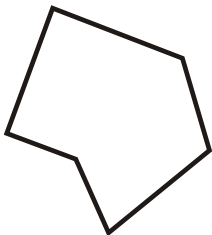
6)



Irregular Pentagon

---


7)



Irregular Hexagon

---

8)



Square

---