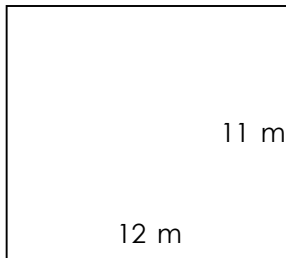


Perimeter of rectangles

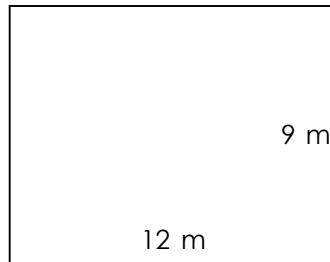
Grade 3 Geometry Worksheet

Find the perimeter of each rectangle.

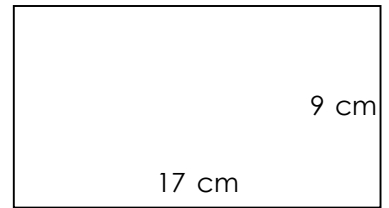
1)



2)



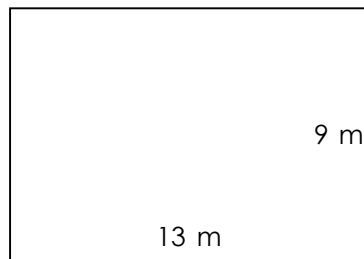
3)



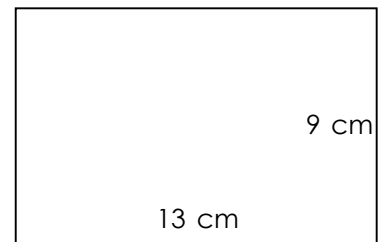
4)



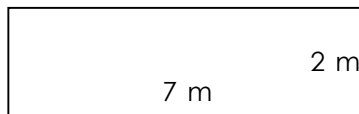
5)



6)



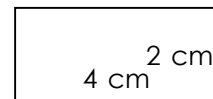
7)



8)



9)



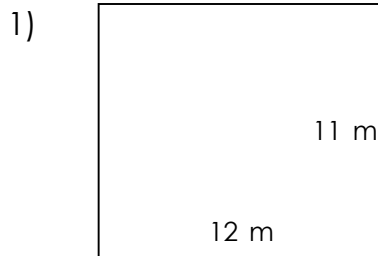
Find the perimeter of the square.



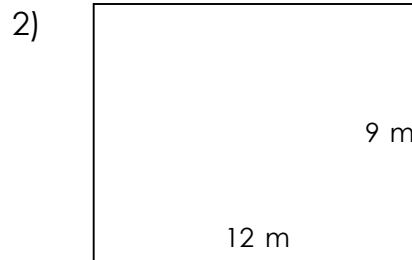
Perimeter of rectangles

Grade 3 Geometry Worksheet

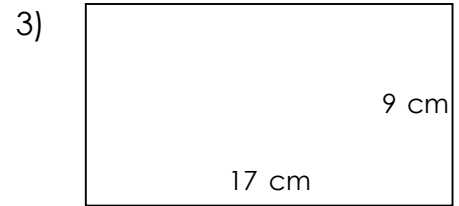
Find the perimeter of each rectangle.




$P = 46 \text{ m}$




$P = 42 \text{ m}$



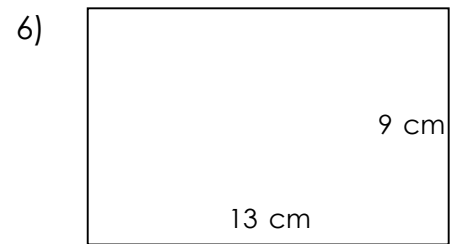
$P = 52 \text{ cm}$



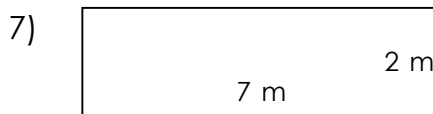
$P = 40 \text{ m}$



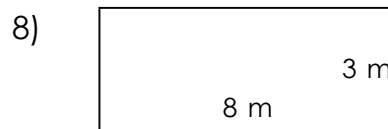
$P = 44 \text{ m}$



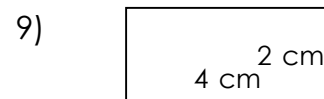
$P = 44 \text{ cm}$



$P = 18 \text{ m}$



$P = 22 \text{ m}$



$P = 12 \text{ cm}$

Find the perimeter of the square.



Perimeter = 84 cm