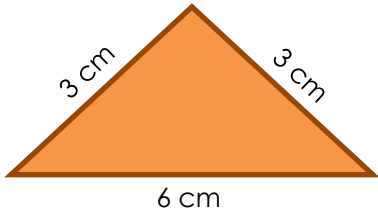


Perimeters of irregular shapes

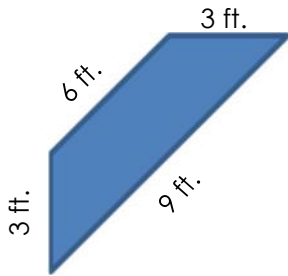
Grade 3 Geometry Worksheet

Find the perimeter of the shapes shown below.

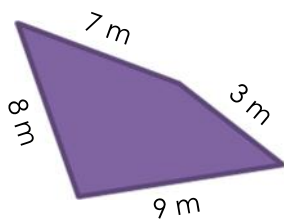
1)



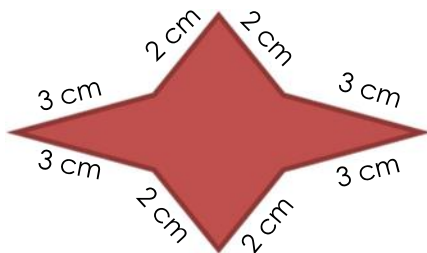
3)



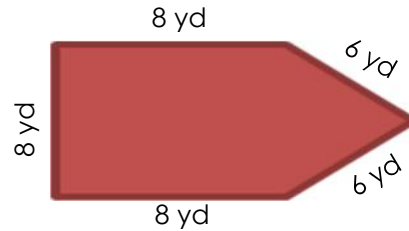
5)



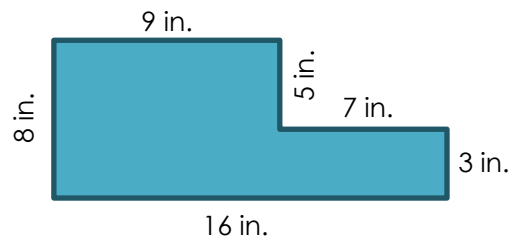
7)



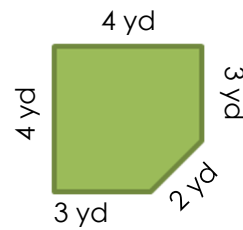
2)



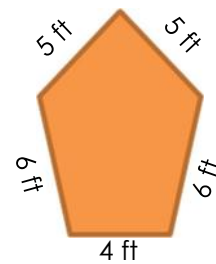
4)



6)



8)



Answers

- 1) 12 cm
- 2) 36 yd
- 3) 21 ft
- 4) 48 in
- 5) 27 m
- 6) 16 yd
- 7) 20 cm
- 8) 26 ft