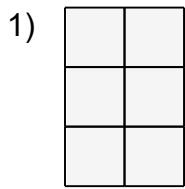


# Perimeters using a grid (inches)

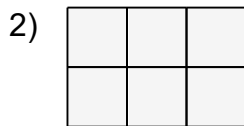
Grade 3 Geometry Worksheet

*Assume each square is 1 inch wide and tall.*

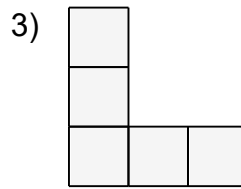
Find the perimeter of each shape in inches.



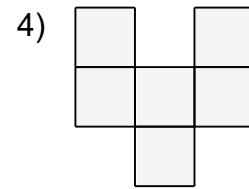
\_\_\_\_\_



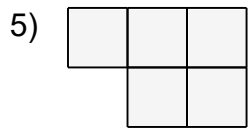
\_\_\_\_\_



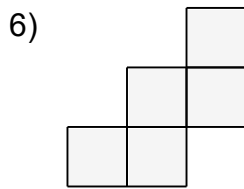
\_\_\_\_\_



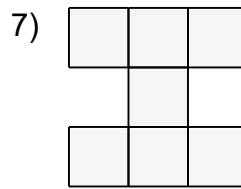
\_\_\_\_\_



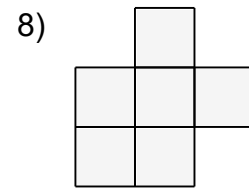
\_\_\_\_\_



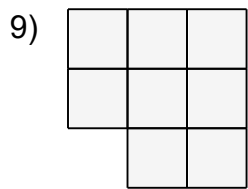
\_\_\_\_\_



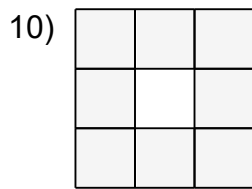
\_\_\_\_\_



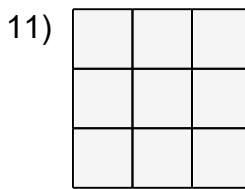
\_\_\_\_\_



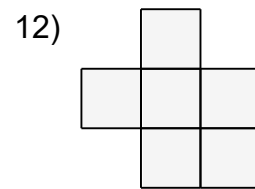
\_\_\_\_\_



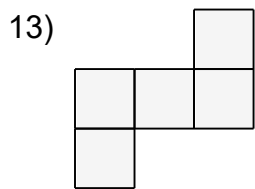
\_\_\_\_\_



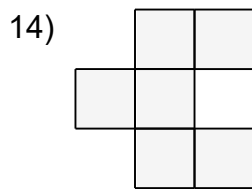
\_\_\_\_\_



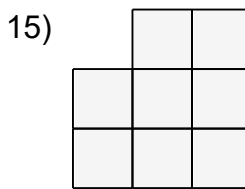
\_\_\_\_\_



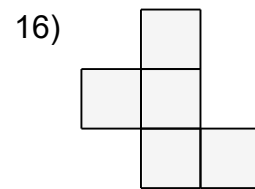
\_\_\_\_\_



\_\_\_\_\_



\_\_\_\_\_



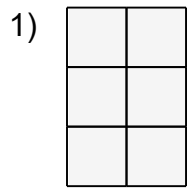
\_\_\_\_\_

## Perimeters using a grid (inches)

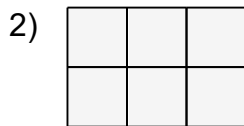
Grade 3 Geometry Worksheet

*Assume each square is 1 inch wide and tall.*

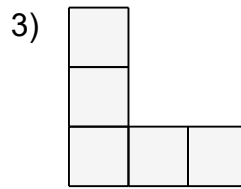
Find the perimeter of each shape in inches.



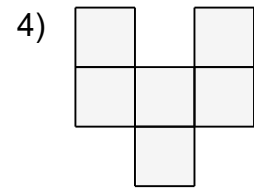
$P = 10$  in



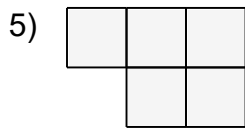
$P = 10$  in



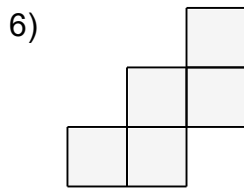
$P = 12$  in



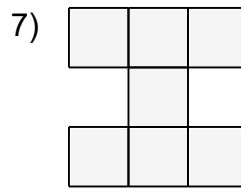
$P = 14$  in



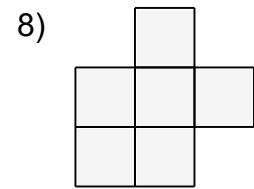
$P = 10$  in



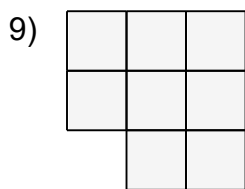
$P = 12$  in



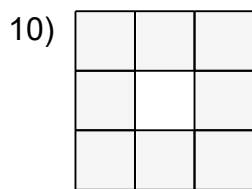
$P = 16$  in



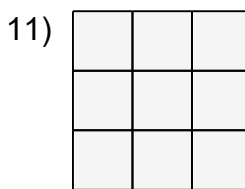
$P = 12$  in



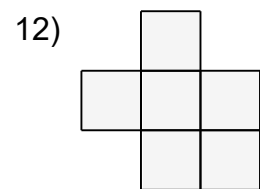
$P = 12$  in



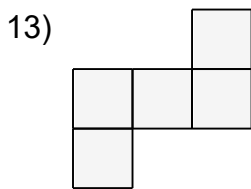
$P = 12$  in



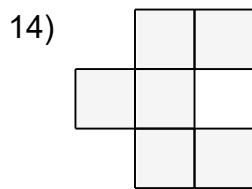
$P = 12$  in



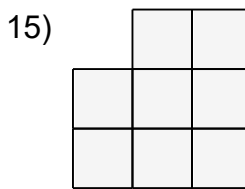
$P = 12$  in



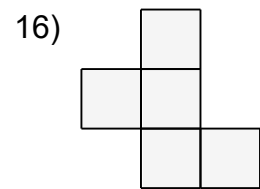
$P = 12$  in



$P = 14$  in



$P = 12$  in



$P = 12$  in