

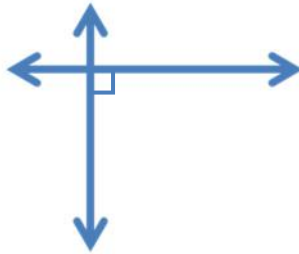
Parallel, perpendicular & intersecting lines

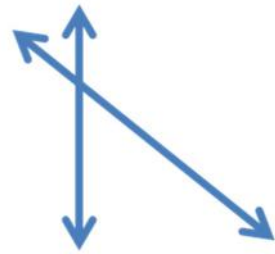
Grade 3 Geometry Worksheet

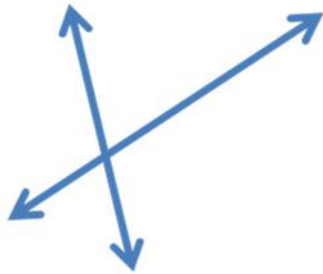
Write "parallel", "perpendicular" or "intersecting" below each pair of lines.

Parallel lines do not intersect or touch each other at any point.
Perpendicular lines form right angles (90°) when they intersect.
Intersecting lines cross at one point.

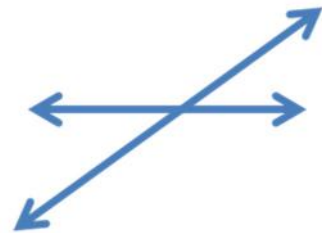












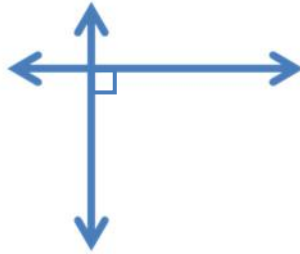
Draw the following.

Parallel lines	Perpendicular lines	Intersecting lines
----------------	---------------------	--------------------

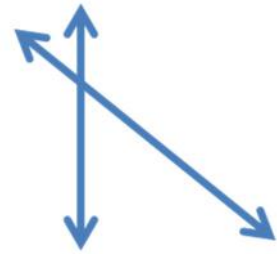
Answers



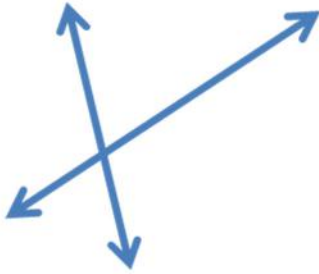
Parallel



Perpendicular



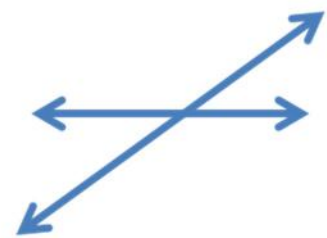
Intersecting



Intersecting



Parallel

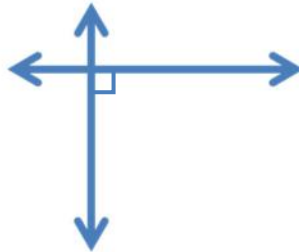


Intersecting

Parallel lines



Perpendicular lines



Intersecting lines

