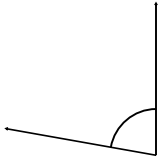


Measuring angles

Grade 4 Geometry Worksheet

Measure the angles using a protractor.

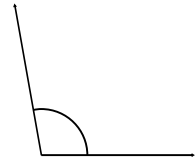
1.



2.




3.



4.



5.



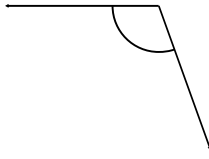
6.



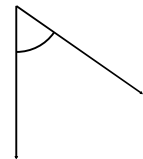
7.



8.



9.

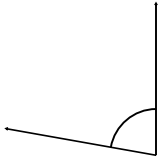


Measuring angles

Grade 4 Geometry Worksheet

Measure the angles using a protractor.

1.



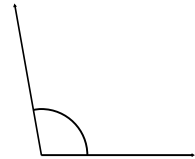
80°

2.



175°

3.




100°

4.



25°

5.



70°

6.



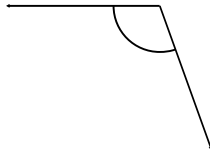
170°

7.



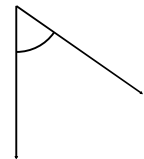
25°

8.



110°

9.



55°