

Areas of rectangles using a grid


Grade 3 Geometry Worksheet

If each square is 1 square unit, find the area of each rectangle.


■ = 1 square unit


























Answers

6 square units	8 square units
12 square units	12 square units
30 square units	36 square units
32 square units	24 square units
50 square units	72 square units