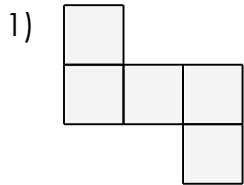


# Areas of shapes using a grid (cm)

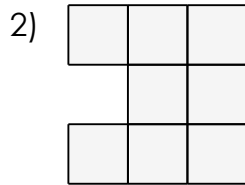
## Grade 3 Geometry Worksheet

Find the area of each shape in square centimetres.

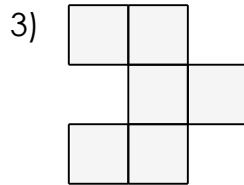
Assume each square is 1 centimetre wide and tall.



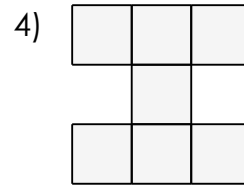
\_\_\_\_\_



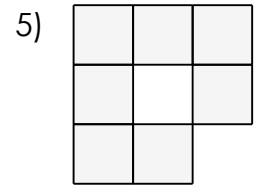
\_\_\_\_\_



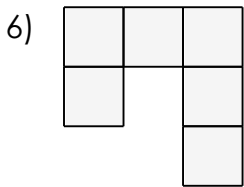
\_\_\_\_\_



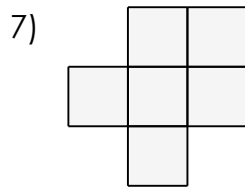
\_\_\_\_\_



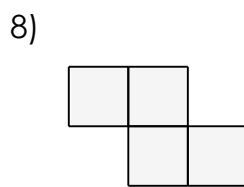
\_\_\_\_\_



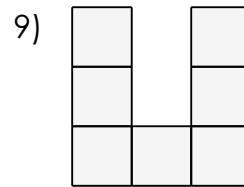
\_\_\_\_\_



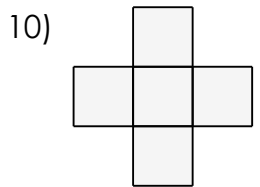
\_\_\_\_\_



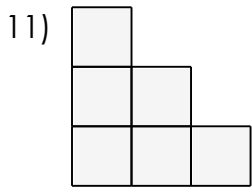
\_\_\_\_\_



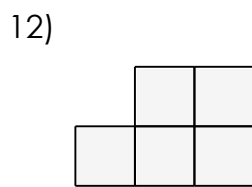
\_\_\_\_\_



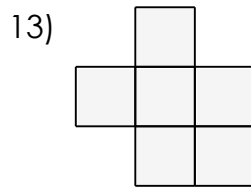
\_\_\_\_\_



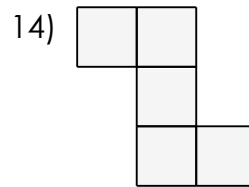
\_\_\_\_\_



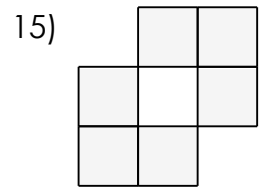
\_\_\_\_\_



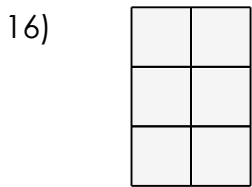
\_\_\_\_\_



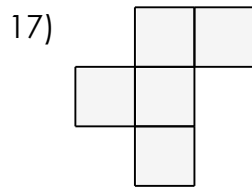
\_\_\_\_\_



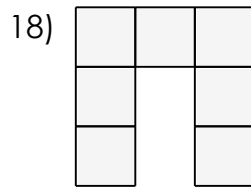
\_\_\_\_\_



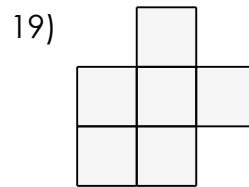
\_\_\_\_\_



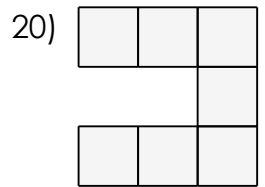
\_\_\_\_\_



\_\_\_\_\_



\_\_\_\_\_



\_\_\_\_\_

# Areas of shapes using a grid (cm)

## Grade 3 Geometry Worksheet

Find the area of each shape in square centimetres.

Assume each square is 1 centimetre wide and tall.

