


Draw rectangles of a given area


Grade 3 Geometry Worksheet

Draw rectangles of the given area that can fit in the grid below.


Area = 16 square units




Area = 30 square units




Area = 27 square units




Area = 48 square units



Area = 60 square units



Area = 121 square units



Answers

<p>Area = 16 square units</p> <p>2 columns AND 8 rows 4 columns AND 4 rows 16 columns AND 1 row</p>	<p>Area = 30 square units</p> <p>2 columns AND 15 rows 3 columns AND 10 rows 5 columns AND 6 rows 6 columns AND 5 rows 10 columns AND 3 rows</p>
<p>Area = 27 square units</p> <p>3 columns AND 9 rows 9 columns AND 3 rows</p>	<p>Area = 48 square units</p> <p>4 columns AND 12 rows 6 columns AND 8 rows 8 columns AND 6 rows 12 columns AND 4 rows</p>
<p>Area = 60 square units</p> <p>4 columns AND 15 rows 5 columns AND 12 rows 6 columns AND 10 rows 10 columns AND 6 rows 12 columns AND 5 rows 15 columns AND 4 rows 20 columns AND 3 rows</p>	<p>Area = 121 square units</p> <p>11 columns AND 11 rows</p>