

Fractional part of a set

Grade 3 Fractions Worksheet


Divide the stars into 4 equal groups.



How many stars are in each group? _____

What is $\frac{1}{4}$ of 4? _____

Divide the stars into 2 equal groups.



How many stars are in each group? _____

What is $\frac{1}{2}$ of 10? _____

Divide the stars into 4 equal groups.



How many stars are in each group? _____

What is $\frac{1}{4}$ of 16? _____

Divide the stars into 2 equal groups.




How many stars are in each group? _____

What is $\frac{1}{2}$ of 18? _____

Answers


Divide the stars into 4 equal groups.



How many stars are in each group? **1**

What is $\frac{1}{4}$ of 4? **1**


Divide the stars into 2 equal groups.



How many stars are in each group? **5**

What is $\frac{1}{2}$ of 10? **5**


Divide the stars into 4 equal groups.



How many stars are in each group? **4**

What is $\frac{1}{4}$ of 16? **4**

Divide the stars into 2 equal groups.



How many stars are in each group? **9**

What is $\frac{1}{2}$ of 18? **9**