


Elapsed time - forward and backwards (5 minute increments)

Grade 3 Time Worksheet


Draw the clock hands to show the time it was or will be.

1.




What time will it be in 3 hours 15 minutes?

2.




What time was it 2 hours 55 minutes ago?

3.




What time was it 3 hours 10 minutes ago?

4.




What time will it be in 4 hours?

5.



What time was it 1 hour 20 minutes ago?

6.




What time was it 5 hours 50 minutes ago?

Elapsed time - forward and backwards (5 minute increments)

Grade 3 Time Worksheet

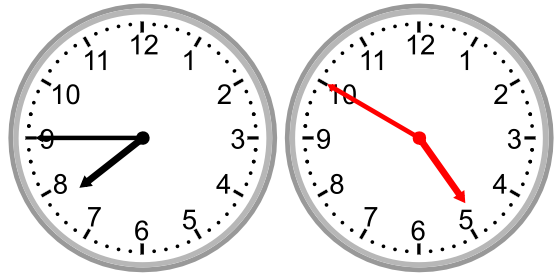
Answers:

1.




What time will it be in 3 hours 15 minutes?

2.




What time was it 2 hours 55 minutes ago?

3.




What time was it 3 hours 10 minutes ago?

4.




What time will it be in 4 hours?

5.



What time was it 1 hour 20 minutes ago?

6.



What time was it 5 hours 50 minutes ago?