


Elapsed time - forward and backwards (5 minute increments)

Grade 3 Time Worksheet


Draw the clock hands to show the time it was or will be.

1.




What time was it 2 hours 5 minutes ago?

2.




What time will it be in 4 hours 30 minutes?

3.




What time was it 5 hours 40 minutes ago?

4.




What time will it be in 1 hour 5 minutes?

5.



What time will it be in 3 hours 35 minutes?

6.



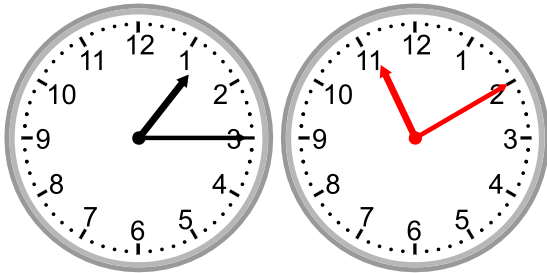
What time was it 5 hours 40 minutes ago?

Elapsed time - forward and backwards (5 minute increments)

Grade 3 Time Worksheet


Answers:

1.




What time was it 2 hours 5 minutes ago?

2.




What time will it be in 4 hours 30 minutes?

3.




What time was it 5 hours 40 minutes ago?

4.



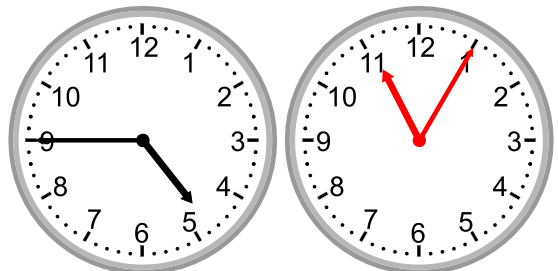
What time will it be in 1 hour 5 minutes?

5.



What time will it be in 3 hours 35 minutes?

6.



What time was it 5 hours 40 minutes ago?