


# Elapsed time - forward and backwards (15 minute increments)

## Grade 3 Time Worksheet


Draw the clock hands to show the time it was or will be.

1.




What time was it 3 hours 15 minutes ago?

2.




What time was it 1 hour 30 minutes ago?

3.




What time will it be in 3 hours?

4.




What time was it 5 hours ago?

5.



What time will it be in 2 hours 45 minutes?

6.

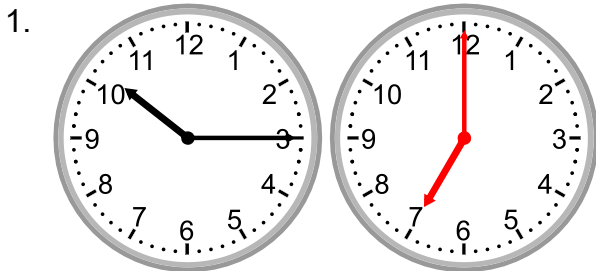


What time was it 1 hour 15 minutes ago?

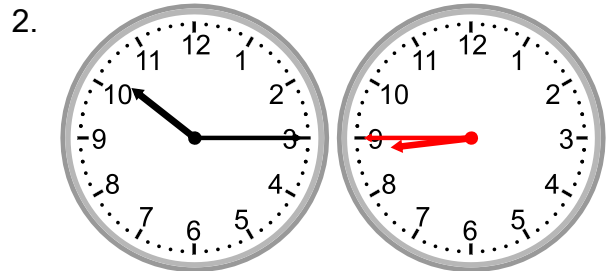
# Elapsed time - forward and backwards (15 minute increments)

## Grade 3 Time Worksheet


### Answers:




What time was it 3 hours 15 minutes ago?




What time was it 1 hour 30 minutes ago?



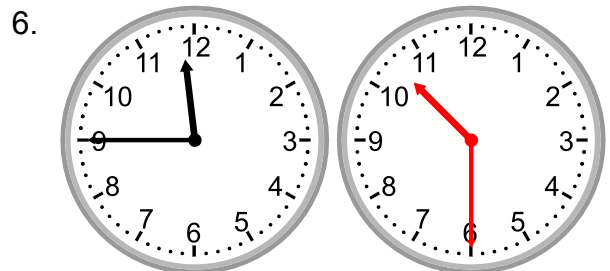
What time will it be in 3 hours?



What time was it 5 hours ago?



What time will it be in 2 hours 45 minutes?



What time was it 1 hour 15 minutes ago?