


# Elapsed time - forward and backwards (1 minute increments)

## Grade 3 Time Worksheet


Draw the clock hands to show the time it was or will be.

1.




What time was it 3 hours 2 minutes ago?

2.




What time will it be in 3 hours 51 minutes?

3.




What time was it 3 hours 21 minutes ago?

4.




What time will it be in 1 hour 33 minutes?

5.



What time will it be in 1 hour 9 minutes?

6.

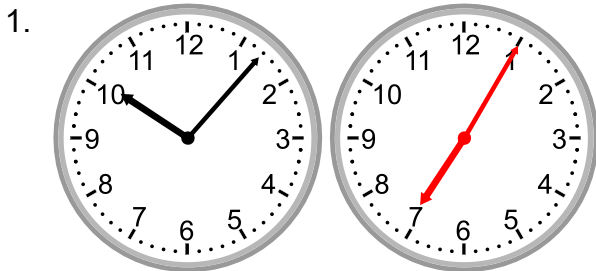


What time will it be in 4 hours 13 minutes?


# Elapsed time - forward and backwards (1 minute increments)

## Grade 3 Time Worksheet


### Answers:




What time was it 3 hours 2 minutes ago?




What time will it be in 3 hours 51 minutes?




What time was it 3 hours 21 minutes ago?



What time will it be in 1 hour 33 minutes?



What time will it be in 1 hour 9 minutes?



What time will it be in 4 hours 13 minutes?