


Elapsed time - forward and backwards (1 minute increments)

Grade 3 Time Worksheet


Draw the clock hands to show the time it was or will be.

1.




What time will it be in 2 hours 24 minutes?

2.




What time will it be in 2 hours 55 minutes?

3.




What time was it 1 hour 10 minutes ago?

4.




What time will it be in 1 hour 11 minutes?

5.



What time was it 5 hours 55 minutes ago?

6.




What time will it be in 1 hour 59 minutes?

Elapsed time - forward and backwards (1 minute increments)

Grade 3 Time Worksheet


Answers:

1.




What time will it be in 2 hours 24 minutes?

2.



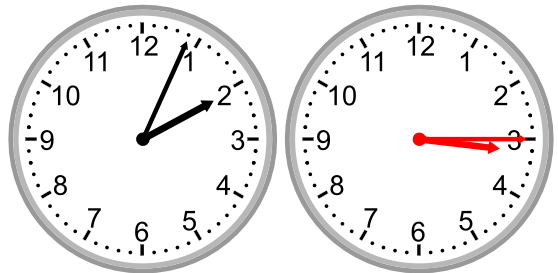
What time will it be in 2 hours 55 minutes?

3.



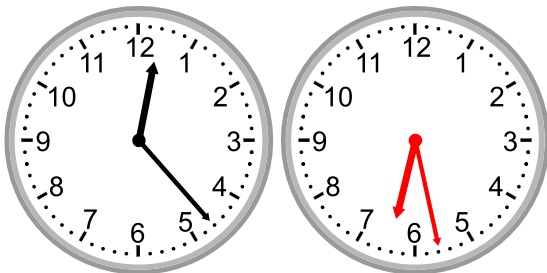
What time was it 1 hour 10 minutes ago?

4.




What time will it be in 1 hour 11 minutes?

5.



What time was it 5 hours 55 minutes ago?

6.



What time will it be in 1 hour 59 minutes?