


Elapsed time - forward and backwards (1 minute increments)

Grade 3 Time Worksheet


Draw the clock hands to show the time it was or will be.

1.




What time was it 1 hour 38 minutes ago?

2.




What time was it 2 hours 14 minutes ago?

3.




What time was it 2 hours 15 minutes ago?

4.




What time will it be in 3 hours 5 minutes?

5.



What time will it be in 5 hours 24 minutes?

6.




What time will it be in 5 hours 58 minutes?

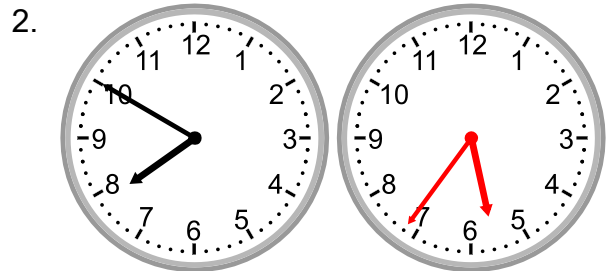
Elapsed time - forward and backwards (1 minute increments)

Grade 3 Time Worksheet


Answers:




What time was it 1 hour 38 minutes ago?




What time was it 2 hours 14 minutes ago?




What time was it 2 hours 15 minutes ago?



What time will it be in 3 hours 5 minutes?



What time will it be in 5 hours 24 minutes?



What time will it be in 5 hours 58 minutes?