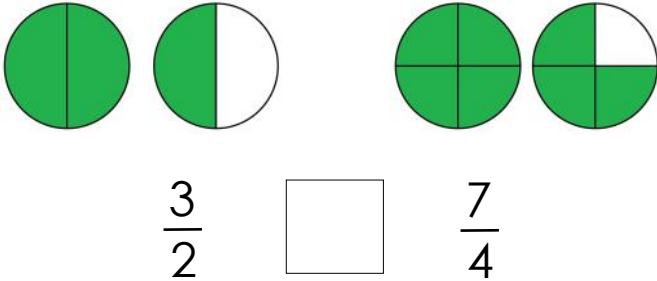


# Comparing proper and improper fractions

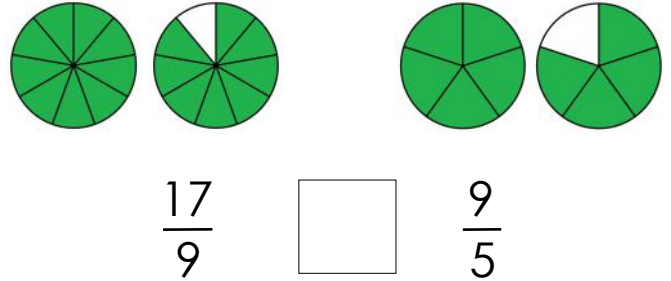
## Grade 3 Fractions Worksheet

Write  $>$  (greater than),  $<$  (less than) or  $=$  (equal to) between the fractions.

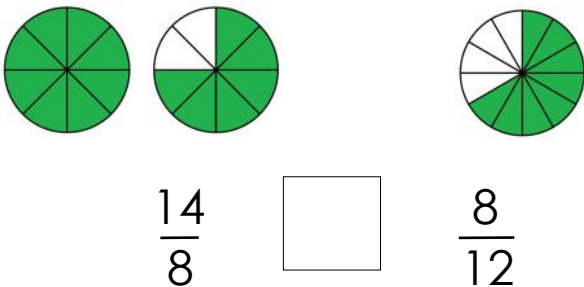
1)



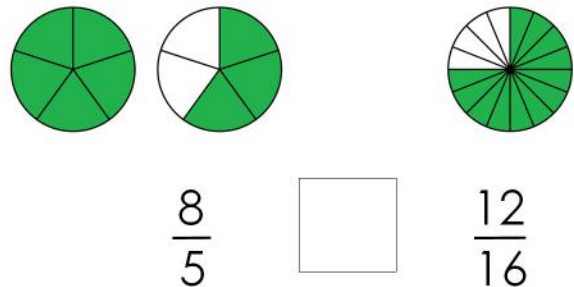
2)



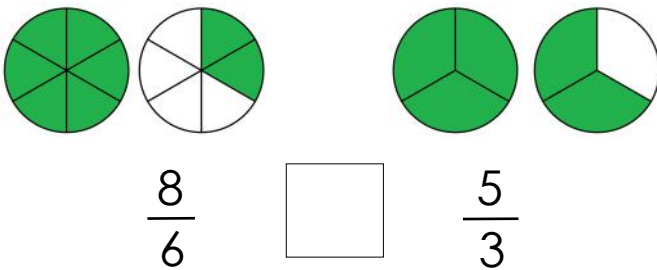
3)



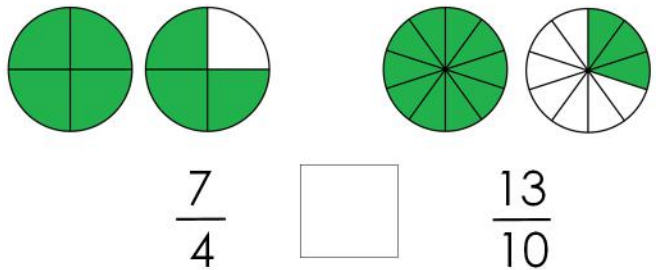
4)



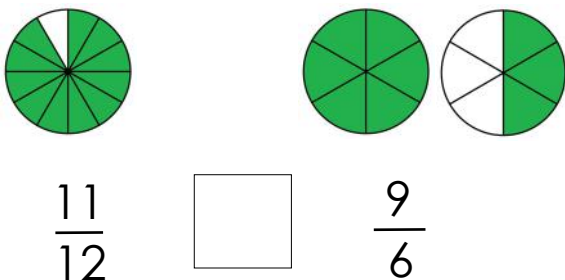
5)



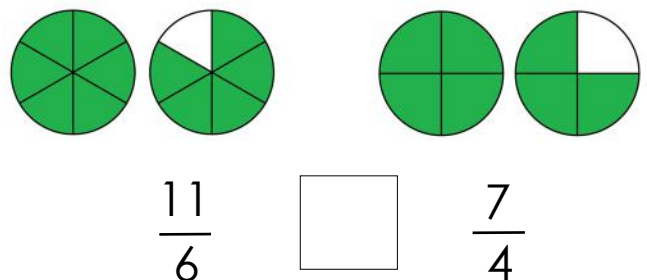
6)



7)



8)



# Answers

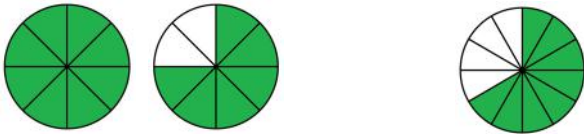
1)



$$\frac{3}{2} <$$

$$\frac{7}{4}$$

3)



$$\frac{14}{8} >$$

$$\frac{8}{12}$$

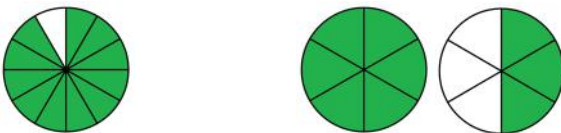
5)



$$\frac{8}{6} <$$

$$\frac{5}{3}$$


7)



$$\frac{11}{12} <$$

$$\frac{9}{6}$$

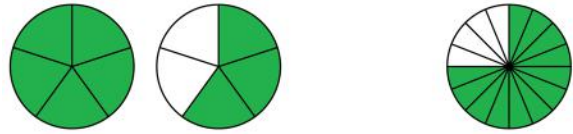
2)



$$\frac{17}{9} >$$

$$\frac{9}{5}$$

4)



$$\frac{8}{5} >$$

$$\frac{12}{16}$$

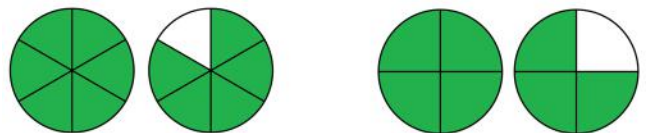
6)



$$\frac{7}{4} >$$

$$\frac{13}{10}$$

8)



$$\frac{11}{6} <$$

$$\frac{7}{3}$$