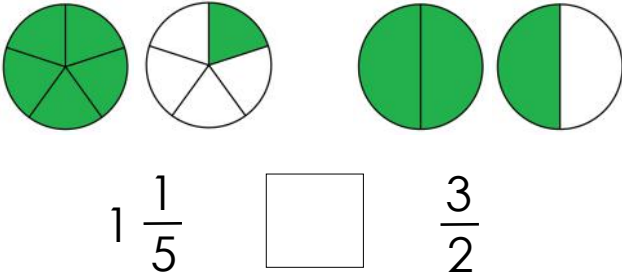


Comparing mixed numbers and fractions

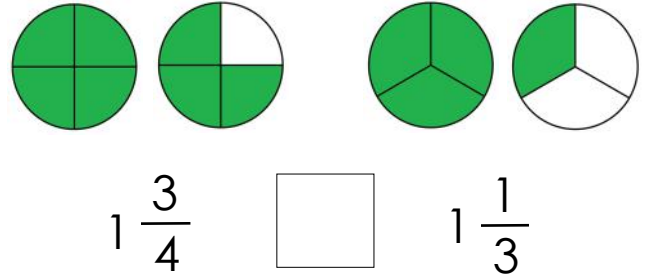
Grade 3 Fractions Worksheet

Write $>$ (greater than), $<$ (less than) or $=$ (equal to) between the fractions.

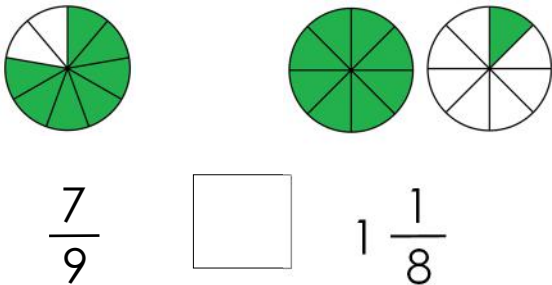
1)



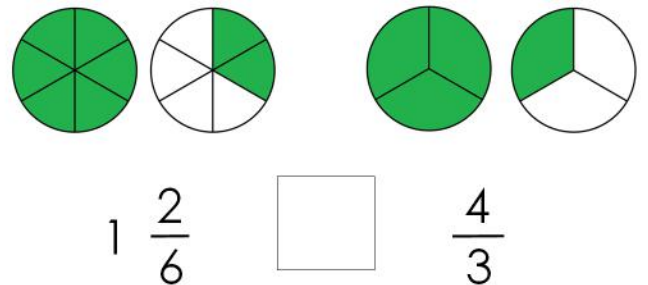
2)



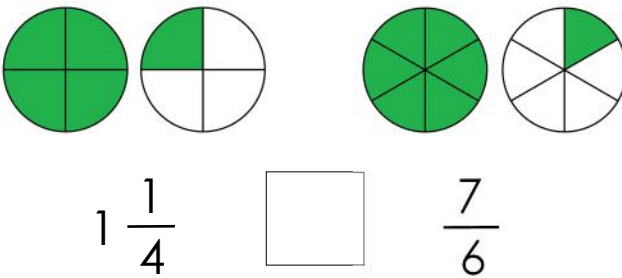
3)



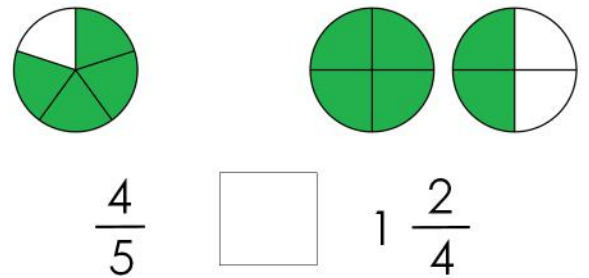
4)



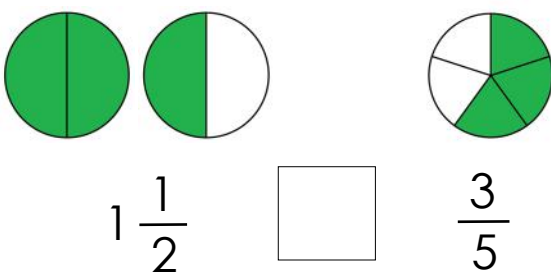
5)



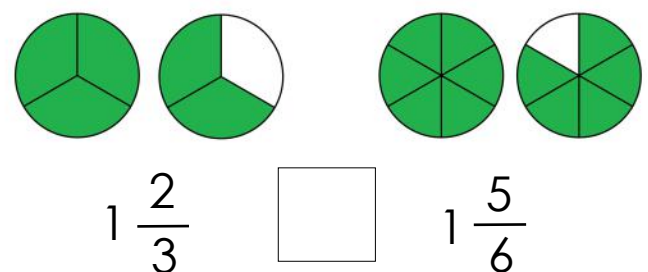
6)



7)

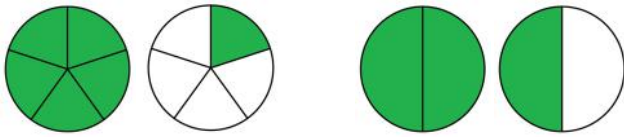


8)



Answers

1)



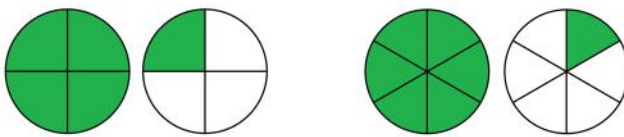
$$1 \frac{4}{5} < 1 \frac{3}{2}$$

3)



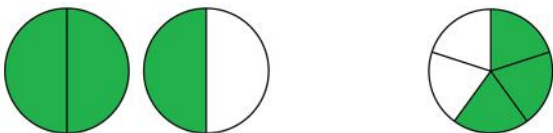
$$\frac{7}{9} < 1 \frac{1}{8}$$

5)



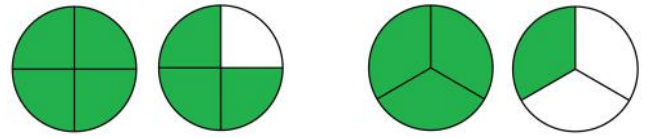
$$1 \frac{3}{4} > 1 \frac{7}{6}$$

7)



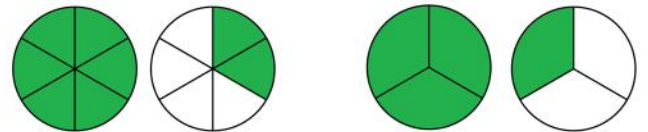
$$1 \frac{1}{2} > 1 \frac{3}{5}$$

2)



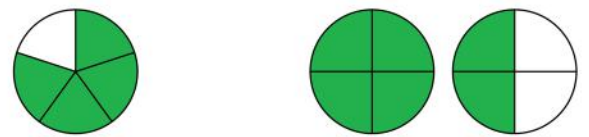
$$1 \frac{3}{4} > 1 \frac{1}{3}$$

4)



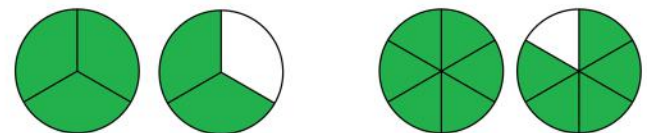
$$1 \frac{2}{6} = \frac{4}{3}$$

6)



$$\frac{4}{5} < 1 \frac{2}{4}$$

8)



$$1 \frac{2}{3} < 1 \frac{5}{6}$$