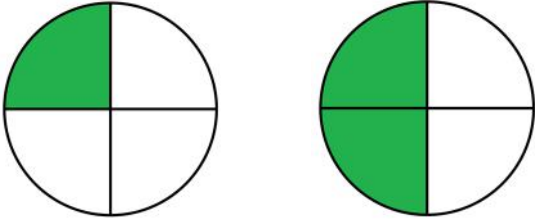
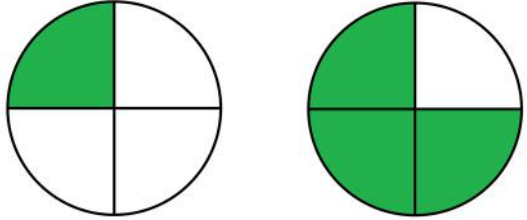


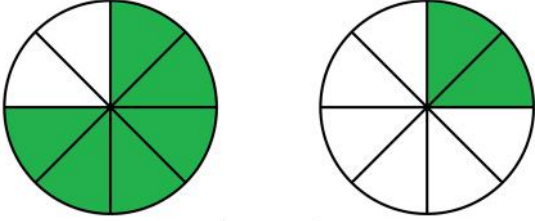
# Comparing fractions with same denominator

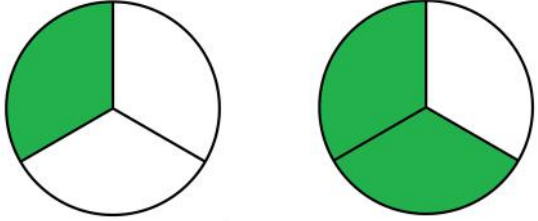
## Grade 3 Fractions Worksheet

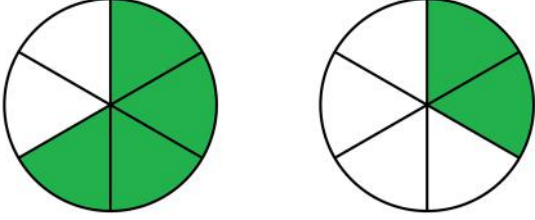
Write  $>$  (greater than),  $<$  (less than) or  $=$  (equal to) between the fractions.

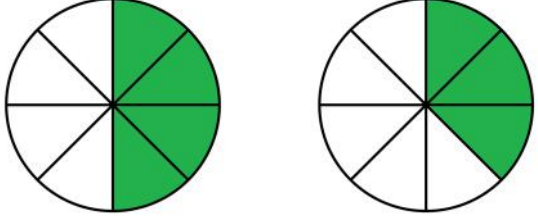
1)   $\frac{1}{4}$    $\frac{2}{4}$

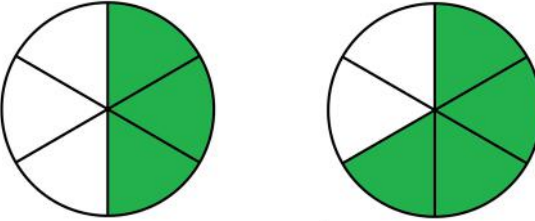
2)   $\frac{1}{4}$    $\frac{3}{4}$

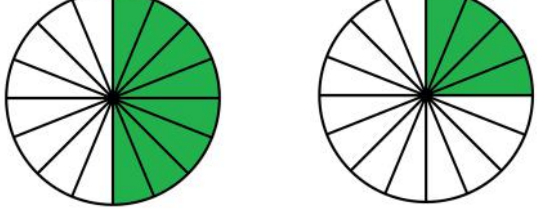
3)   $\frac{6}{8}$    $\frac{2}{8}$

4)   $\frac{1}{3}$    $\frac{2}{3}$

5)   $\frac{4}{6}$    $\frac{2}{6}$

6)   $\frac{4}{8}$    $\frac{3}{8}$

7)   $\frac{3}{6}$    $\frac{4}{6}$

8)   $\frac{8}{16}$    $\frac{4}{16}$

# Answers

