


# Telling time - whole hours (draw the clock)

## Grade 2 Time Worksheet


Draw the time shown on each clock.

1.




4:00

2.




12:00

3.




9:00

4.




1:00

5.




6:00

6.




8:00

7.




3:00

8.



10:00

9.




7:00

# Telling time - whole hours (draw the clock)

## Grade 2 Time Worksheet


Draw the time shown on each clock.

1.




4:00

2.




12:00

3.




9:00

4.




1:00

5.




6:00

6.




8:00

7.




3:00

8.



10:00

9.



7:00