


Telling time - whole hours (draw the clock)

Grade 2 Time Worksheet


Draw the time shown on each clock.

1.




1:00

2.




12:00

3.




11:00

4.




5:00

5.




7:00

6.




8:00

7.




9:00

8.



4:00

9.




6:00

Telling time - whole hours (draw the clock)

Grade 2 Time Worksheet


Draw the time shown on each clock.

1.




1:00

2.




12:00

3.




11:00

4.




5:00

5.




7:00

6.




8:00

7.




9:00

8.



4:00

9.



6:00