


Telling time - quarter hours (draw the clock)

Grade 2 Time Worksheet


Draw the time shown on each clock.

1.




1:30

2.




4:00

3.




4:15

4.




2:30

5.




3:15

6.




9:15

7.




7:45

8.



12:45

9.




11:30

Telling time - quarter hours (draw the clock)

Grade 2 Time Worksheet


Draw the time shown on each clock.

1.




1:30

2.




4:00

3.




4:15

4.




2:30

5.




3:15

6.




9:15

7.




7:45

8.



12:45

9.



11:30