


Telling time - quarter hours (draw the clock)

Grade 2 Time Worksheet


Draw the time shown on each clock.

1.




8:00

2.




1:45

3.




5:45

4.




8:45

5.




9:00

6.




11:00

7.




2:30

8.



10:45

9.




12:30

Telling time - quarter hours (draw the clock)

Grade 2 Time Worksheet


Draw the time shown on each clock.

1.




8:00

2.




1:45

3.




5:45

4.




8:45

5.




9:00

6.




11:00

7.




2:30

8.



10:45

9.



12:30