


# Telling time - quarter hours (draw the clock)

## Grade 2 Time Worksheet


Draw the time shown on each clock.

1.




11:45

2.




11:15

3.




5:30

4.




7:15

5.




5:45

6.




1:45

7.




12:00

8.



2:30

9.




10:45

# Telling time - quarter hours (draw the clock)

## Grade 2 Time Worksheet


Draw the time shown on each clock.

1.




11:45

2.




11:15

3.




5:30

4.




7:15

5.




5:45

6.




1:45

7.




12:00

8.



2:30

9.



10:45