


Telling time - quarter hours (draw the clock)

Grade 2 Time Worksheet


Draw the time shown on each clock.

1.




12:45

2.




2:30

3.




12:30

4.




3:45

5.




6:15

6.




9:00

7.




7:45

8.



9:45

9.




11:00

Telling time - quarter hours (draw the clock)

Grade 2 Time Worksheet


Draw the time shown on each clock.

1.




12:45

2.




2:30

3.




12:30

4.




3:45

5.




6:15

6.




9:00

7.




7:45

8.



9:45

9.



11:00