


Rows, columns & arrays

Grade 2 Multiplication Worksheet

Fill in the blanks.




2 rows of 3

$$2 \times 3 = 6$$



_____ rows of _____

$$\underline{\hspace{2cm}} \times \underline{\hspace{2cm}} = \underline{\hspace{2cm}}$$



_____ rows of _____

$$\underline{\hspace{2cm}} \times \underline{\hspace{2cm}} = \underline{\hspace{2cm}}$$



_____ rows of _____

$$\underline{\hspace{2cm}} \times \underline{\hspace{2cm}} = \underline{\hspace{2cm}}$$



_____ rows of _____


$$\underline{\hspace{2cm}} \times \underline{\hspace{2cm}} = \underline{\hspace{2cm}}$$



_____ rows of _____

$$\underline{\hspace{2cm}} \times \underline{\hspace{2cm}} = \underline{\hspace{2cm}}$$

Answers




2 rows of 3

$$2 \times 3 = 6$$



2 rows of 1

$$2 \times 1 = 2$$




3 rows of 2

$$3 \times 2 = 6$$



4 rows of 5

$$4 \times 5 = 20$$



3 rows of 3

$$3 \times 3 = 9$$



5 rows of 2

$$5 \times 2 = 10$$