
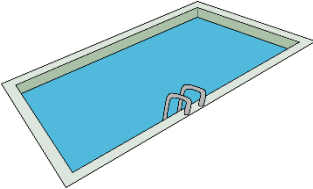






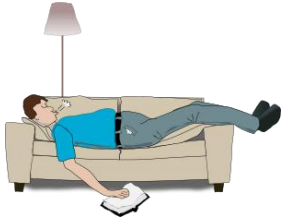



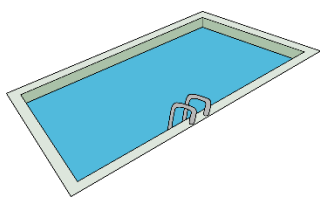







Estimating time: minutes, hours or days?

Grade 1 Time Worksheet

Does this activity take minutes, hours or days? Please circle.

<p>Putting on shoes</p> 	<p>Swimming lesson</p> 	<p>Taking school bus to school</p> 
Minutes / Hours / Days	Minutes / Hours / Days	Minutes / Hours / Days
<p>Watching TV</p> 	<p>Taking a shower</p> 	<p>Putting on jacket</p> 
Minutes / Hours / Days	Minutes / Hours / Days	Minutes / Hours / Days
<p>Going up to the first floor</p> 	<p>Riding a bike</p> 	<p>Taking a nap</p> 
Minutes / Hours / Days	Minutes / Hours / Days	Minutes / Hours / Days

Answers

<p>Putting on shoes</p> 	<p>Swimming lesson</p> 	<p>Taking school bus to school</p> 
Minutes	Hours	Minutes
<p>Watching TV</p> 	<p>Taking a shower</p> 	<p>Putting on jacket</p> 
Minutes or Hours	Minutes	Minutes
<p>Going up to the first floor</p> 	<p>Riding a bike</p> 	<p>Taking a nap</p> 
Minutes	Minutes	Minutes or Hours