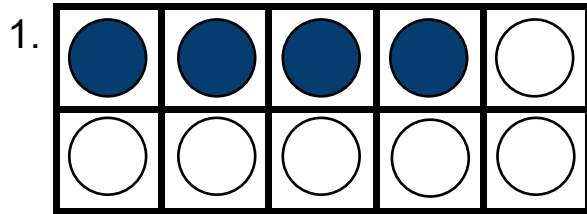


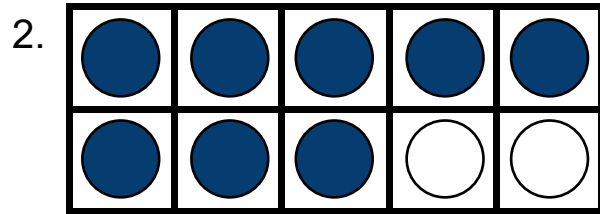
Making ten with ten frames

Grade 1 Counting Worksheet

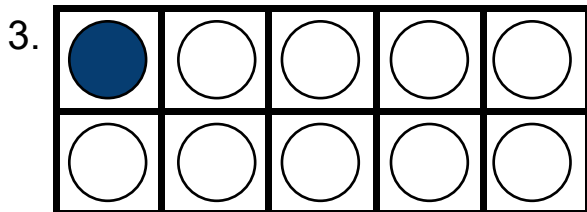
Count the blue and white counters in each frame. Fill in the blanks.



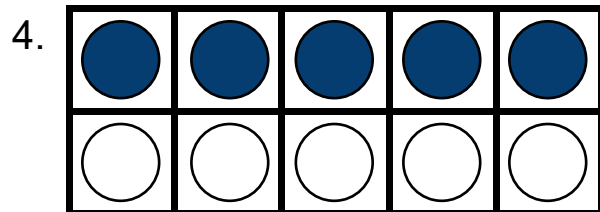
$$4 + \underline{\quad} = 10$$



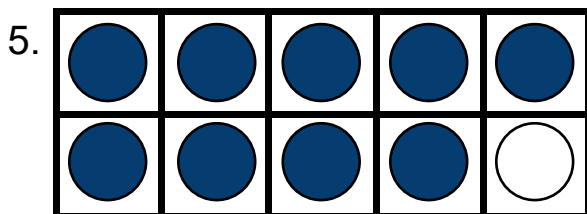
$$8 + \underline{\quad} = 10$$



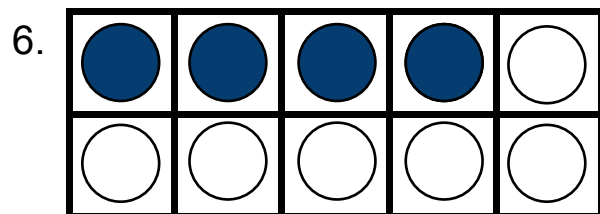
$$\underline{\quad} + 9 = 10$$



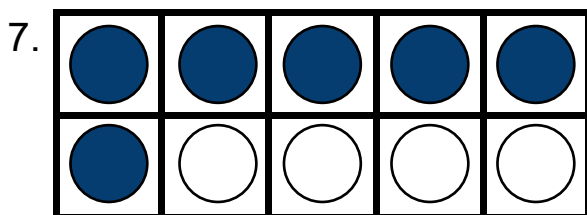
$$5 + \underline{\quad} = 10$$



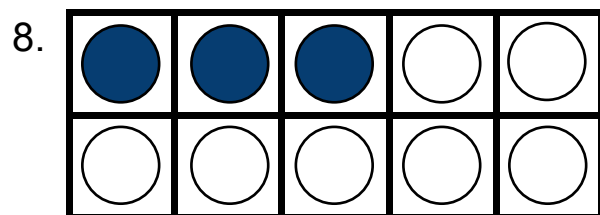
$$9 + \underline{\quad} = 10$$



$$\underline{\quad} + 6 = 10$$



$$\underline{\quad} + 4 = 10$$

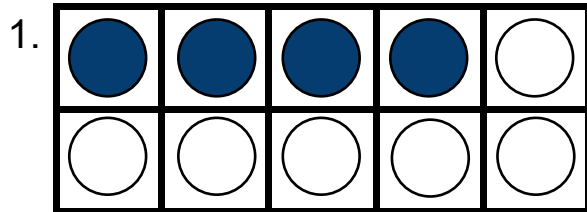


$$3 + \underline{\quad} = 10$$

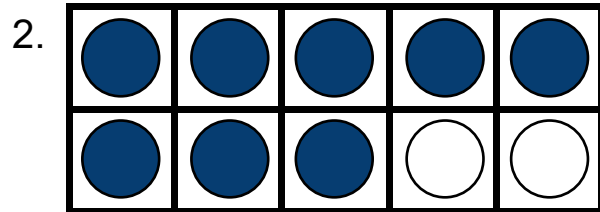
Making ten with ten frames

Grade 1 Counting Worksheet

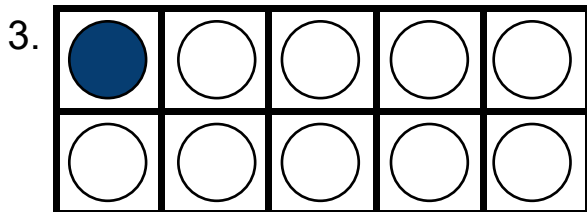
Answers:



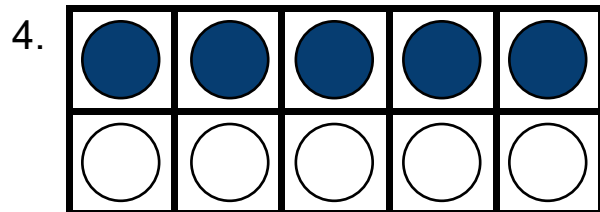
$$4 + \underline{6} = 10$$



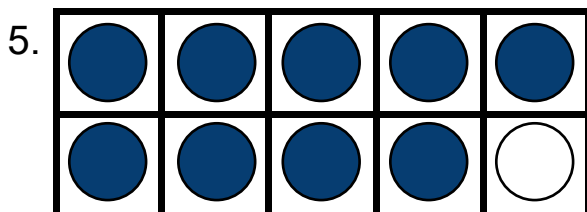
$$8 + \underline{2} = 10$$



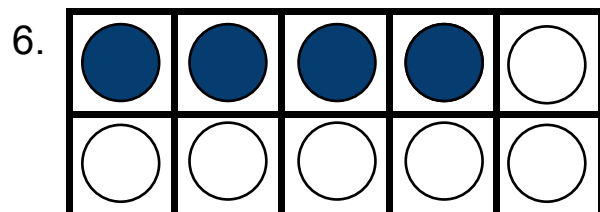
$$\underline{1} + 9 = 10$$



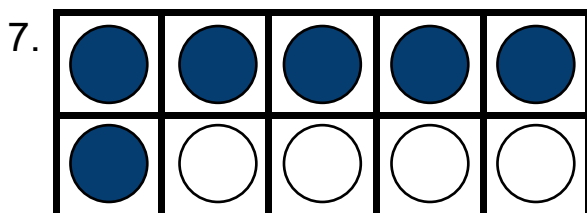
$$5 + \underline{5} = 10$$



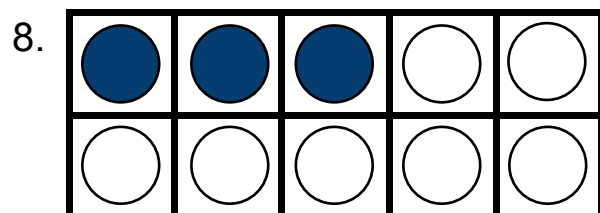
$$9 + \underline{1} = 10$$



$$\underline{4} + 6 = 10$$



$$\underline{6} + 4 = 10$$



$$3 + \underline{7} = 10$$