

Ten frames counting

Grade 1 Counting Worksheet

Draw the counters for each frame.

1. 5 counters

2. 8 counters

3. 1 counter

4. 9 counters

5. 2 counters

6. 7 counters

7. 3 counters

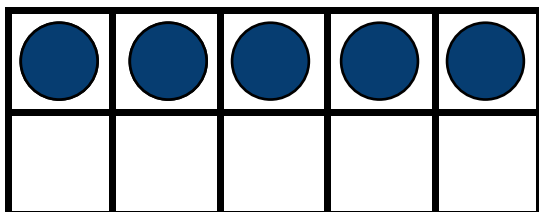
8. 4 counters

Ten frames counting

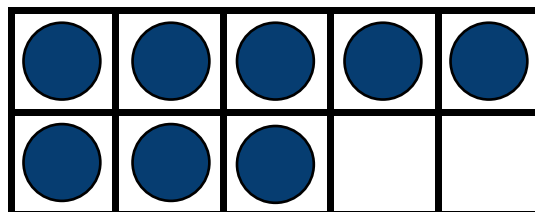
Grade 1 Counting Worksheet

Answers:


1. 5 counters



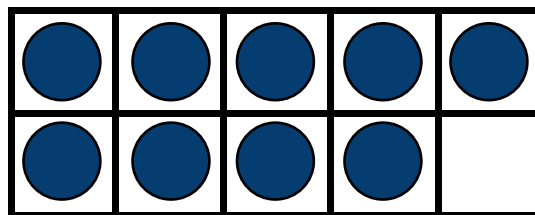
2. 8 counters



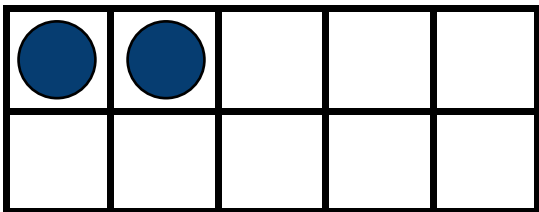
3. 1 counter



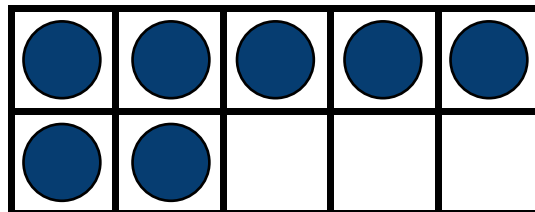
4. 9 counters



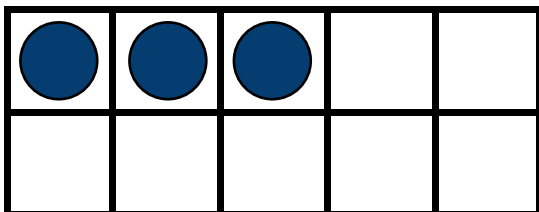
5. 2 counters



6. 7 counters



7. 3 counters



8. 4 counters

