


Telling time - whole hours (draw the clock)

Grade 1 Time Worksheet


Draw the time shown on each clock.

1.




4:00

2.




3:00

3.




9:00

4.




2:00

5.




12:00

6.




7:00

7.




6:00

8.



11:00

9.




8:00

Telling time - whole hours (draw the clock)

Grade 1 Time Worksheet


Draw the time shown on each clock.

1.




4:00

2.




3:00

3.




9:00

4.




2:00

5.




12:00

6.




7:00

7.




6:00

8.



11:00

9.



8:00