


# Telling time - whole hours (draw the clock)

## Grade 1 Time Worksheet


Draw the time shown on each clock.

1.




8:00

2.




2:00

3.




3:00

4.




12:00

5.




10:00

6.




11:00

7.




7:00

8.



4:00

9.




9:00

# Telling time - whole hours (draw the clock)

## Grade 1 Time Worksheet


Draw the time shown on each clock.

1.




8:00

2.




2:00

3.




3:00

4.




12:00

5.




10:00

6.




11:00

7.




7:00

8.



4:00

9.



9:00