


Telling time - whole hours (draw the clock)

Grade 1 Time Worksheet


Draw the time shown on each clock.

1.




4:00

2.




2:00

3.




11:00

4.




12:00

5.




1:00

6.




8:00

7.




10:00

8.



3:00

9.




9:00

Telling time - whole hours (draw the clock)

Grade 1 Time Worksheet


Draw the time shown on each clock.

1.




4:00

2.




2:00

3.




11:00

4.




12:00

5.




1:00

6.




8:00

7.




10:00

8.



3:00

9.



9:00