


Telling time - quarter hours (draw the clock)

Grade 1 Time Worksheet


Draw the time shown on each clock.

1.




12:15

2.




2:45

3.




5:30

4.




5:15

5.




7:30

6.




11:15

7.




6:00

8.



10:00

9.




3:00

Telling time - quarter hours (draw the clock)

Grade 1 Time Worksheet


Draw the time shown on each clock.

1.




12:15

2.




2:45

3.




5:30

4.




5:15

5.




7:30

6.




11:15

7.




6:00

8.



10:00

9.



3:00