


# Telling time - quarter hours (draw the clock)

## Grade 1 Time Worksheet


Draw the time shown on each clock.

1.




9:45

2.




8:45

3.




2:00

4.




7:45

5.




12:30

6.




6:00

7.




4:45

8.



2:15

9.




8:30

# Telling time - quarter hours (draw the clock)

## Grade 1 Time Worksheet


Draw the time shown on each clock.

1.




9:45

2.




8:45

3.




2:00

4.




7:45

5.




12:30

6.




6:00

7.




4:45

8.



2:15

9.



8:30