


Telling time - quarter hours (draw the clock)

Grade 1 Time Worksheet


Draw the time shown on each clock.

1.




3:45

2.




7:00

3.




12:45

4.




5:00

5.




2:15

6.




5:45

7.




4:45

8.



1:00

9.




6:30

Telling time - quarter hours (draw the clock)

Grade 1 Time Worksheet


Draw the time shown on each clock.

1.




3:45

2.




7:00

3.




12:45

4.




5:00

5.




2:15

6.




5:45

7.




4:45

8.



1:00

9.



6:30