


# Telling time - half hours (draw the clock)

## Grade 1 Time Worksheet


Draw the time shown on each clock.

1.




4:00

2.




1:30

3.




9:00

4.




7:30

5.




1:00

6.




12:00

7.




3:30

8.



6:30

9.




8:30

# Telling time - half hours (draw the clock)

## Grade 1 Time Worksheet


Draw the time shown on each clock.

1.




4:00

2.




1:30

3.




9:00

4.




7:30

5.




1:00

6.




12:00

7.




3:30

8.



6:30

9.



8:30