


# Telling time - half hours (draw the clock)

## Grade 1 Time Worksheet


Draw the time shown on each clock.

1.




6:00

2.




8:00

3.




8:30

4.




5:00

5.




2:30

6.




3:30

7.




9:30

8.



3:00

9.




6:30

# Telling time - half hours (draw the clock)

## Grade 1 Time Worksheet


Draw the time shown on each clock.

1.




6:00

2.




8:00

3.




8:30

4.




5:00

5.




2:30

6.




3:30

7.




9:30

8.



3:00

9.



6:30