


Telling time - half hours (draw the clock)

Grade 1 Time Worksheet


Draw the time shown on each clock.

1.




6:30

2.




6:00

3.




10:00

4.




4:00

5.




9:30

6.




2:30

7.




2:00

8.



1:00

9.




8:30

Telling time - half hours (draw the clock)

Grade 1 Time Worksheet


Draw the time shown on each clock.

1.




6:30

2.




6:00

3.




10:00

4.




4:00

5.




9:30

6.




2:30

7.




2:00

8.



1:00

9.



8:30