

Canadian coins and their values

Grade 1 Money Worksheet

Draw a line to match each coin with its value.



\$1



5¢



\$2













10¢



25¢

Draw the 5 coins in order from least valuable to most valuable.

Answers

\$1
 5¢
 \$2
 10¢
 25¢

  <p>Nickel 5¢</p>	  <p>Dime 10¢</p>	  <p>Quarter 25¢</p>	  <p>Loonie \$1</p>	  <p>Toonie \$2</p>
--	---	--	---	---