

Comparing lengths using centimeters

Grade 1 Measurement Worksheet

Measure the following objects and circle the shorter object.



Length: _____ centimeters




Length: _____ centimeters




Length: _____ centimeters



Length: _____ centimeters



Length: _____ centimeters



Length: _____ centimeters

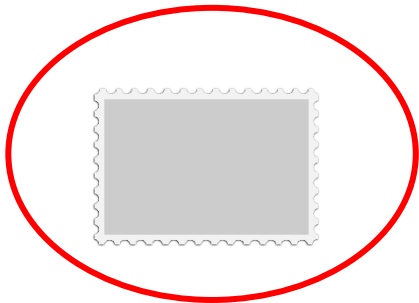
Answers



Length: 4 centimeters





Length: 8 centimeters



Length: 3 centimeters



Length: 6 centimeters



Length: 5 centimeters Length: 9 centimeters