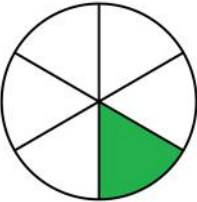
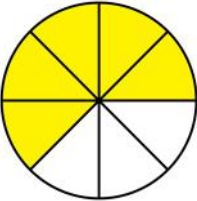
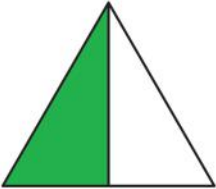

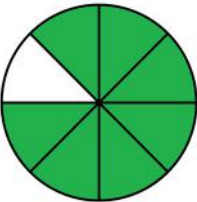


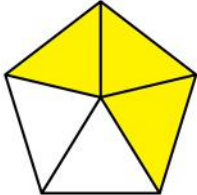
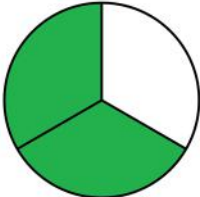
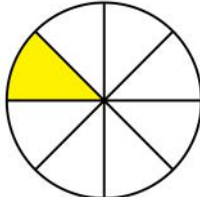


Matching fractions to a picture

Grade 1 Fractions Worksheet

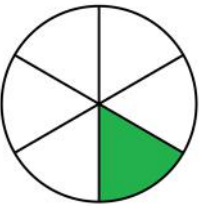
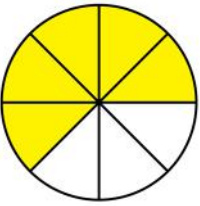
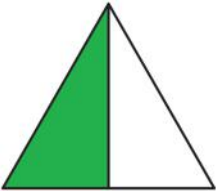

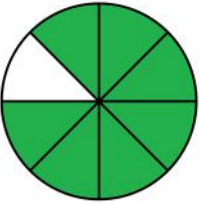
What fraction of each shape is colored?

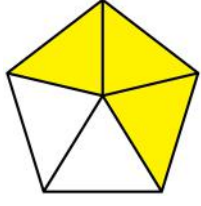
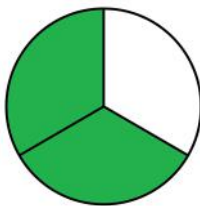
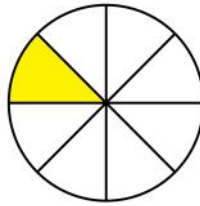
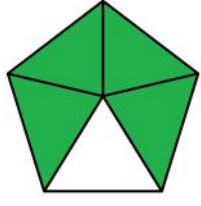

Circle the correct answer.

	$\frac{2}{4}$	$\frac{1}{3}$	$\frac{1}{5}$	$\frac{1}{6}$
	$\frac{3}{5}$	$\frac{5}{8}$	$\frac{3}{8}$	$\frac{1}{8}$
	$\frac{1}{2}$	$\frac{1}{3}$	$\frac{1}{5}$	$\frac{2}{6}$
	$\frac{1}{4}$	$\frac{4}{5}$	$\frac{4}{8}$	$\frac{3}{4}$
	$\frac{1}{7}$	$\frac{7}{8}$	$\frac{1}{4}$	$\frac{7}{6}$

	$\frac{2}{3}$	$\frac{3}{4}$	$\frac{2}{5}$	$\frac{3}{5}$
	$\frac{1}{3}$	$\frac{2}{3}$	$\frac{2}{4}$	$\frac{1}{2}$
	$\frac{1}{7}$	$\frac{1}{8}$	$\frac{7}{6}$	$\frac{7}{8}$
	$\frac{1}{4}$	$\frac{3}{4}$	$\frac{4}{5}$	$\frac{1}{5}$
	$\frac{2}{6}$	$\frac{4}{6}$	$\frac{1}{2}$	$\frac{4}{5}$

Answers

	$\frac{2}{4}$	$\frac{1}{3}$	$\frac{1}{5}$	$\frac{1}{6}$
	$\frac{3}{5}$	$\frac{5}{8}$	$\frac{3}{8}$	$\frac{1}{8}$
	$\frac{1}{2}$	$\frac{1}{3}$	$\frac{1}{5}$	$\frac{2}{6}$
	$\frac{1}{4}$	$\frac{4}{5}$	$\frac{4}{8}$	$\frac{3}{4}$
	$\frac{1}{7}$	$\frac{7}{8}$	$\frac{1}{4}$	$\frac{7}{6}$

	$\frac{2}{3}$	$\frac{3}{4}$	$\frac{2}{5}$	$\frac{3}{5}$
	$\frac{1}{3}$	$\frac{2}{3}$	$\frac{2}{4}$	$\frac{1}{2}$
	$\frac{1}{7}$	$\frac{1}{8}$	$\frac{7}{6}$	$\frac{7}{8}$
	$\frac{1}{4}$	$\frac{3}{4}$	$\frac{4}{5}$	$\frac{1}{5}$
	$\frac{2}{6}$	$\frac{4}{6}$	$\frac{1}{2}$	$\frac{4}{5}$