


Identifying “halves” and “quarters”


Grade 1 Fractions Worksheet

Is the shape split into halves or quarters?

Circle the correct answer.




Halves / Quarters



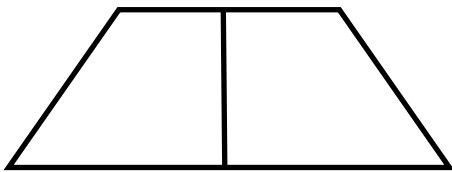
Halves / Quarters




Halves / Quarters




Halves / Quarters



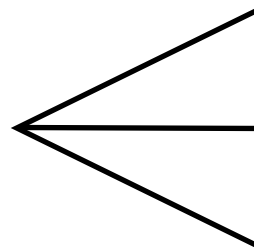
Halves / Quarters



Halves / Quarters

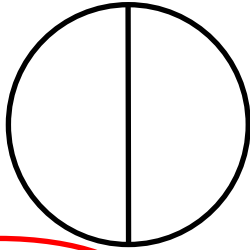


Halves / Quarters

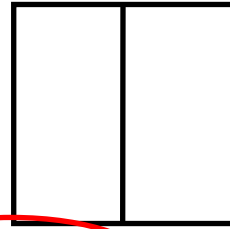


Halves / Quarters

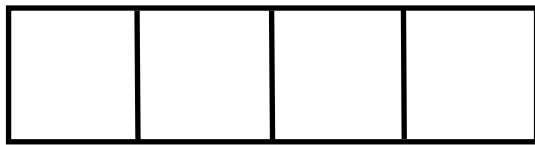
Answers




Halves / Quarters



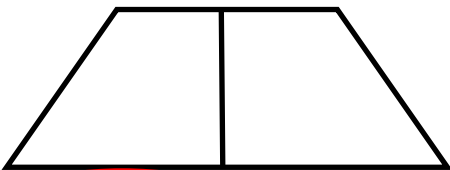
Halves / Quarters



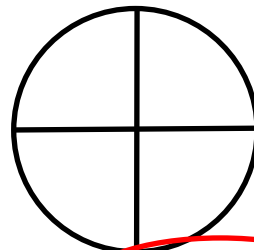
Halves / Quarters




Halves / Quarters



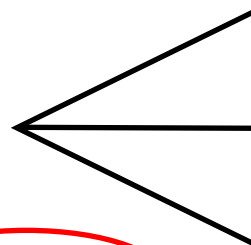
Halves / Quarters



Halves / Quarters



Halves / Quarters



Halves / Quarters