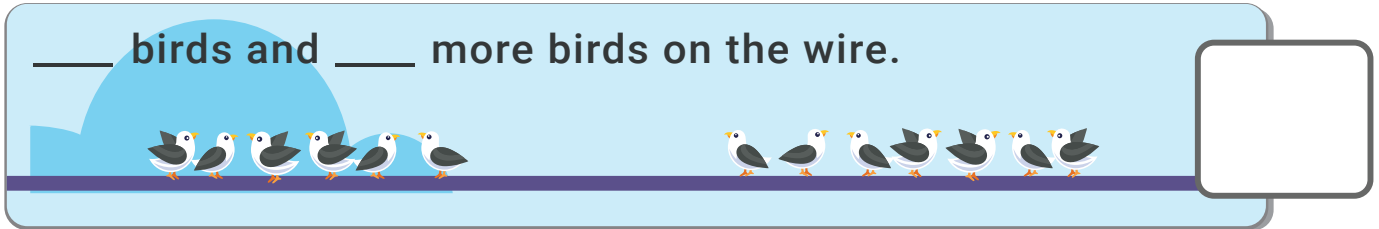


# Counting and combining (1-20)


Grade 1 Counting Worksheet

Count the birds. Fill in the blanks. How many birds in all?

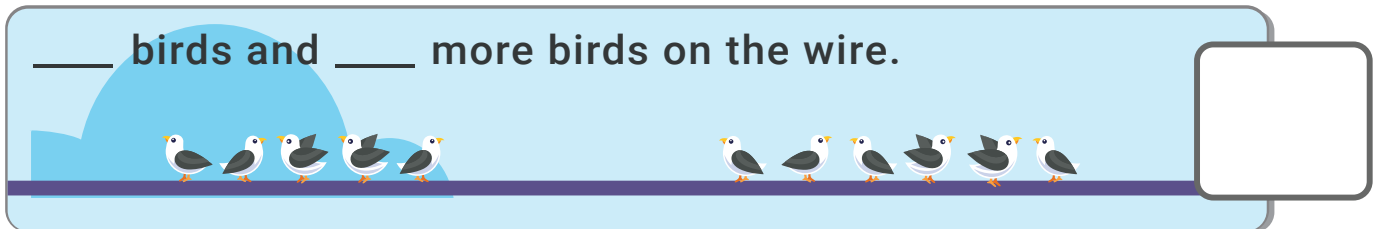
\_\_\_ birds and \_\_\_ more birds on the wire.



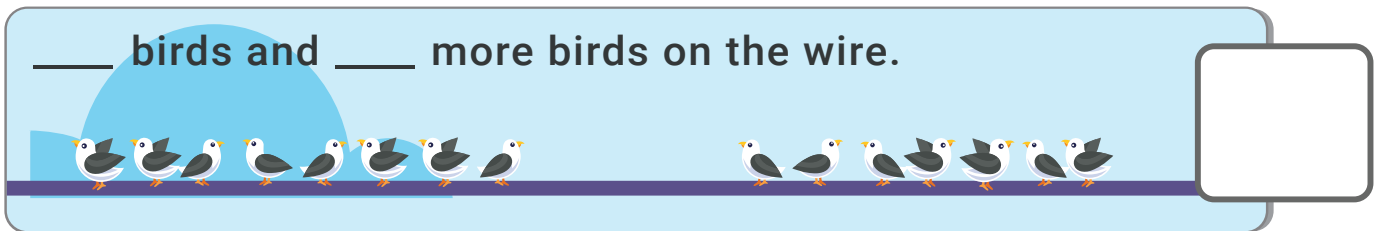
\_\_\_ birds and \_\_\_ more birds on the wire.




\_\_\_ birds and \_\_\_ more birds on the wire.



\_\_\_ birds and \_\_\_ more birds on the wire.



\_\_\_ birds and \_\_\_ more birds on the wire.



## Answers

- 1) **6 birds** and **7 more birds** on the wire = **13 birds**
- 2) **10 birds** and **8 more birds** on the wire = **18 birds**
- 3) **5 birds** and **6 more birds** on the wire = **11 birds**
- 4) **8 birds** and **7 more birds** on the wire = **15 birds**
- 5) **7 birds** and **10 more birds** on the wire = **17 birds**