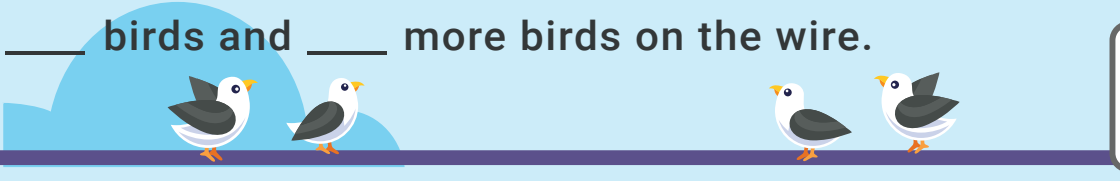


Counting and combining (1-10)

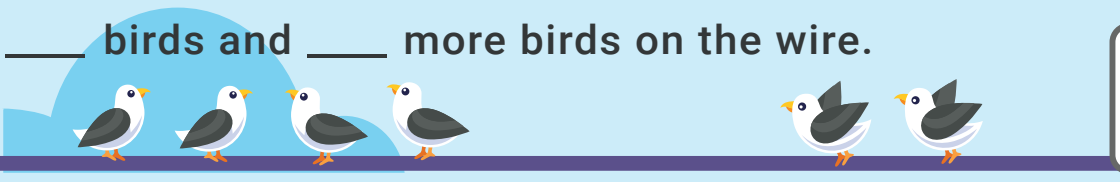
Grade 1 Counting Worksheet

Count the birds. Fill in the blanks. How many birds in all?

___ birds and ___ more birds on the wire.



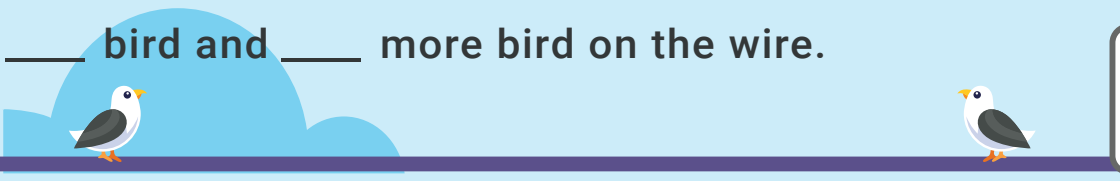
___ birds and ___ more birds on the wire.



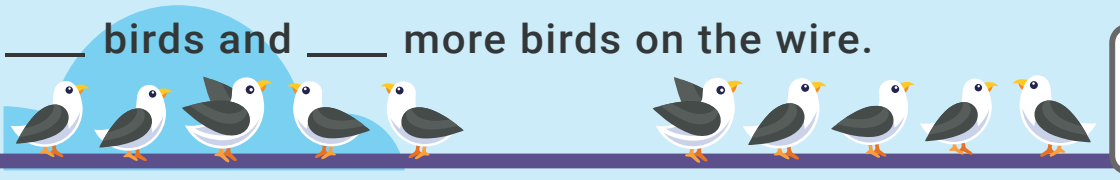
___ birds and ___ more birds on the wire.



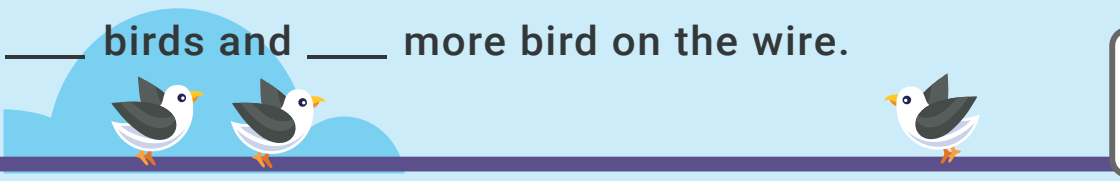
___ bird and ___ more bird on the wire.



___ birds and ___ more birds on the wire.



___ birds and ___ more bird on the wire.



Answers

- 1) **2 birds** and **2 more birds** on the wire = **4 birds**
- 2) **4 birds** and **2 more birds** on the wire = **6 birds**
- 3) **3 birds** and **6 more birds** on the wire = **9 birds**
- 4) **1 bird** and **1 more bird** on the wire = **2 birds**
- 5) **5 birds** and **5 more birds** on the wire = **10 birds**
- 6) **2 birds** and **1 more bird** on the wire = **3 birds**