


Counting and combining (1-10)

Grade 1 Counting Worksheet


Count the birds. Fill in the blanks. How many birds in all?

4 birds and 1 more bird on the wire.




5


___ bird and ___ more bird on the wire.




___ birds and ___ more birds on the wire.




___ birds and ___ more bird on the wire.



___ birds and ___ more birds on the wire.



___ bird and ___ more bird on the wire.



Answers

- 1) **4 birds** and **1 more bird** on the wire = **5 birds**
- 2) **1 bird** and **1 more bird** on the wire = **2 birds**
- 3) **4 birds** and **3 more birds** on the wire = **7 birds**
- 4) **2 birds** and **1 more bird** on the wire = **3 birds**
- 5) **5 birds** and **3 more birds** on the wire = **8 birds**
- 6) **0 bird** and **1 more bird** on the wire = **1 bird**