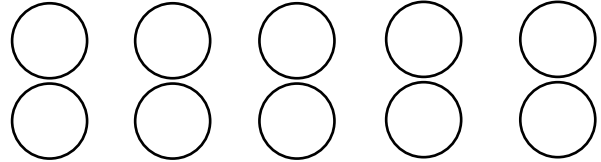


Addition sentences

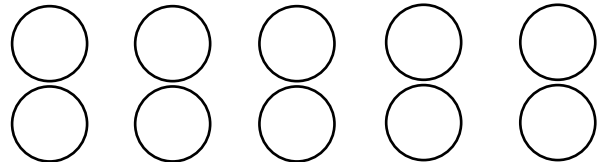
Grade 1 Addition Worksheet

Find the missing number. Color in circles to help.

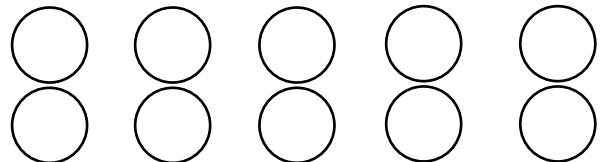
$4 + \underline{\quad} = 6$



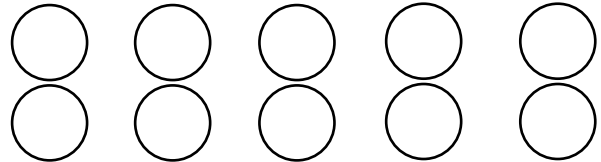
$7 + \underline{\quad} = 8$



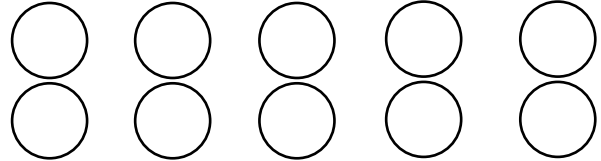
$5 + \underline{\quad} = 9$



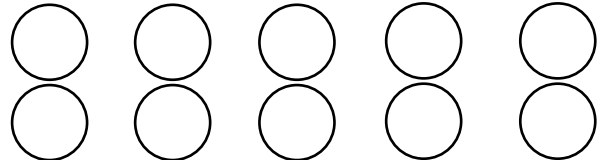
$2 + \underline{\quad} = 5$



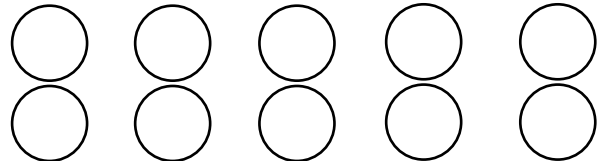
$3 + \underline{\quad} = 4$



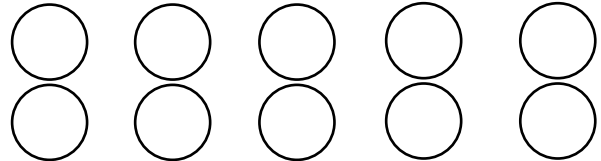
$3 + \underline{\quad} = 8$



$1 + \underline{\quad} = 7$

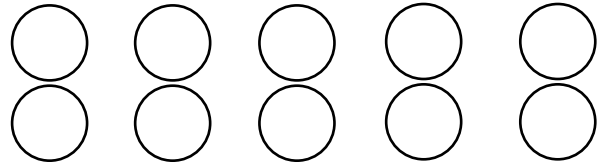


$6 + \underline{\quad} = 8$

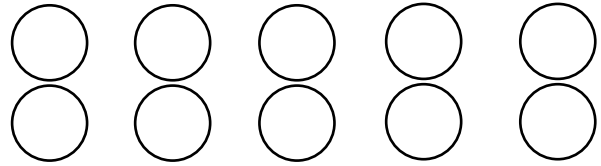


Answers

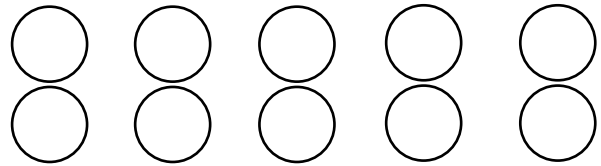
$4 + 2 = 6$



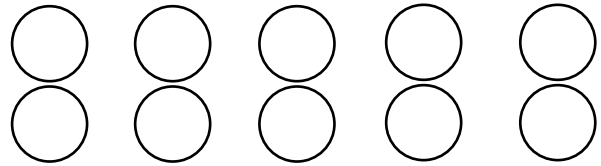
$7 + 1 = 8$



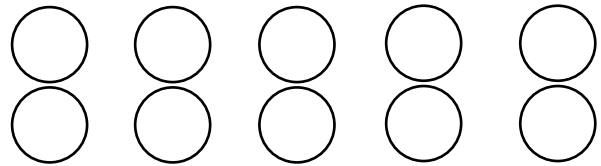
$5 + 4 = 9$



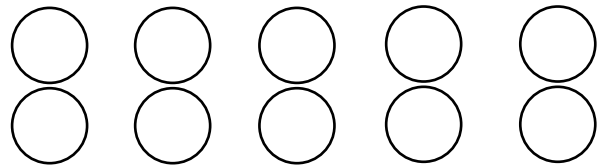
$2 + 3 = 5$



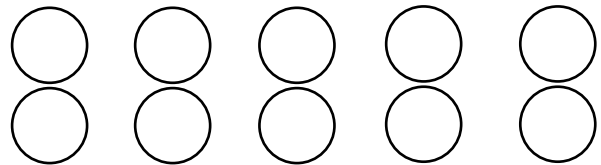
$3 + 1 = 4$



$3 + 5 = 8$



$1 + 6 = 7$



$6 + 2 = 8$

