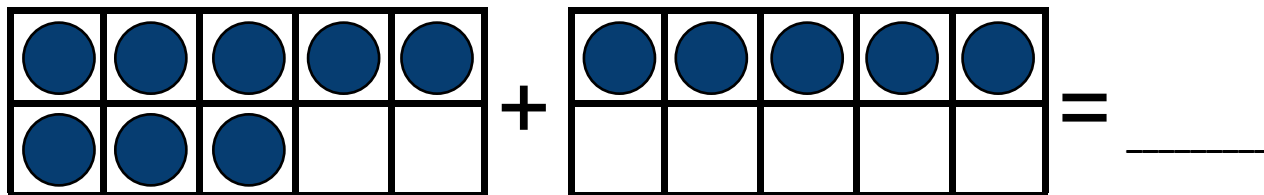


# Addition with ten frames (sums to 20)

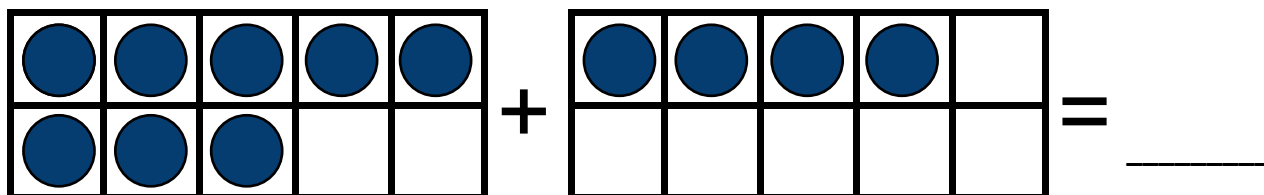
## Grade 1 Counting Worksheet

Add the counters.

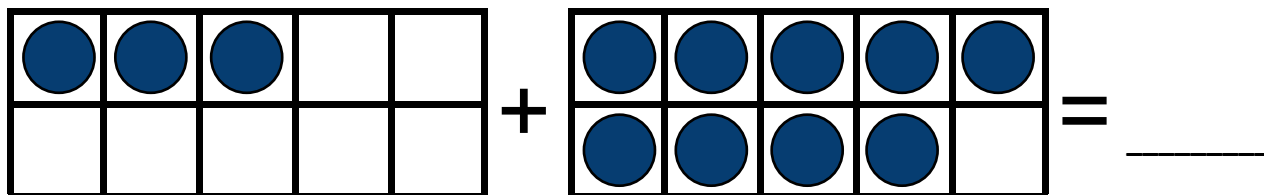
1.



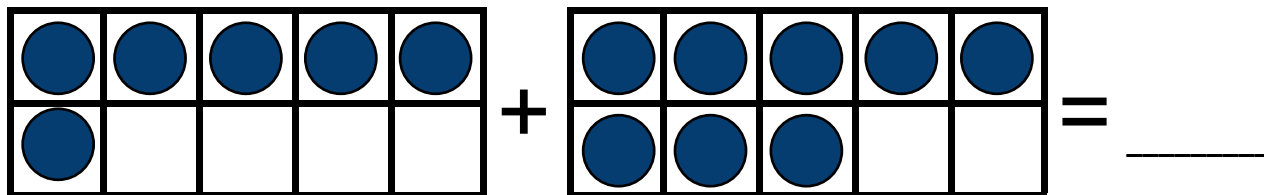
2.



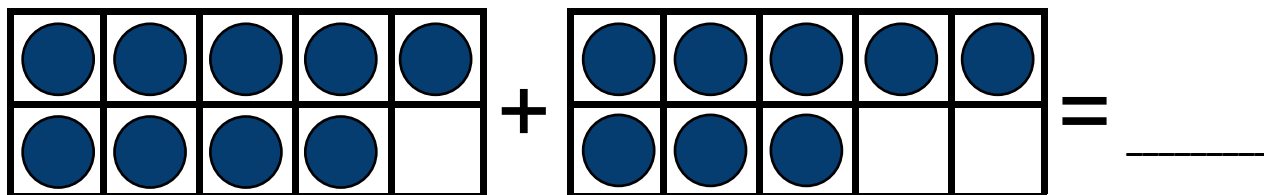
3.



4.



5.



## Addition with ten frames (sums to 20)

### Grade 1 Counting Worksheet

Answers:

1.

$$\begin{array}{|c|c|c|c|c|} \hline \bullet & \bullet & \bullet & \bullet & \bullet \\ \hline \bullet & \bullet & \bullet & & \\ \hline \end{array} + \begin{array}{|c|c|c|c|c|} \hline \bullet & \bullet & \bullet & \bullet & \bullet \\ \hline & & & & \\ \hline \end{array} = \underline{13}$$

2.

$$\begin{array}{|c|c|c|c|c|} \hline \bullet & \bullet & \bullet & \bullet & \bullet \\ \hline \bullet & \bullet & \bullet & & \\ \hline \end{array} + \begin{array}{|c|c|c|c|c|} \hline \bullet & \bullet & \bullet & \bullet & \\ \hline & & & & \\ \hline \end{array} = \underline{12}$$

3.

$$\begin{array}{|c|c|c|c|c|} \hline \bullet & \bullet & \bullet & & \\ \hline & & & & \\ \hline \end{array} + \begin{array}{|c|c|c|c|c|} \hline \bullet & \bullet & \bullet & \bullet & \bullet \\ \hline \bullet & \bullet & \bullet & \bullet & \\ \hline \end{array} = \underline{12}$$

4.

$$\begin{array}{|c|c|c|c|c|} \hline \bullet & \bullet & \bullet & \bullet & \bullet \\ \hline \bullet & & & & \\ \hline \end{array} + \begin{array}{|c|c|c|c|c|} \hline \bullet & \bullet & \bullet & \bullet & \bullet \\ \hline \bullet & \bullet & \bullet & & \\ \hline \end{array} = \underline{14}$$

5.

$$\begin{array}{|c|c|c|c|c|} \hline \bullet & \bullet & \bullet & \bullet & \bullet \\ \hline \bullet & \bullet & \bullet & \bullet & \\ \hline \end{array} + \begin{array}{|c|c|c|c|c|} \hline \bullet & \bullet & \bullet & \bullet & \bullet \\ \hline \bullet & \bullet & \bullet & & \\ \hline \end{array} = \underline{17}$$