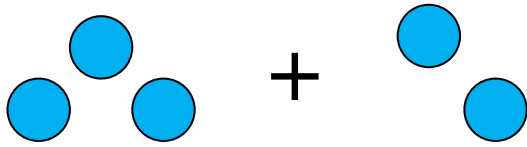


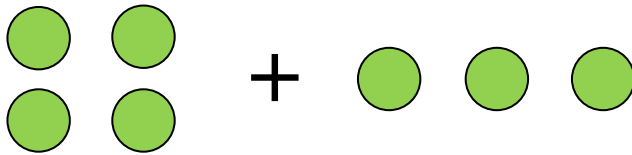
Adding with objects

Grade 1 Addition Worksheet

Count / draw circles, read / write numbers and find the sums.

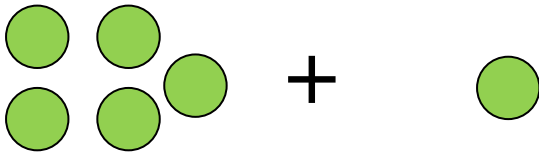


$$\underline{\quad} + \underline{\quad} = \underline{\quad}$$



$$\underline{\quad} + \underline{\quad} = \underline{\quad}$$

$$+ \quad \quad \quad 4 + 2 = \underline{\quad}$$

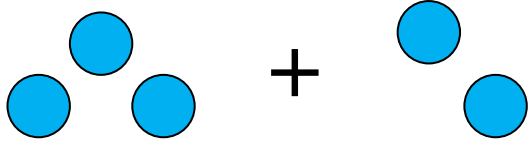


$$\underline{\quad} + \underline{\quad} = \underline{\quad}$$

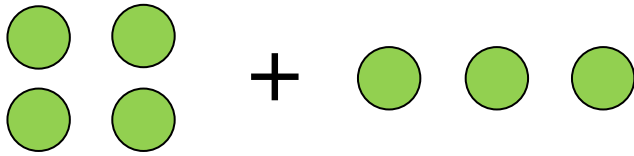
$$+ \quad \quad \quad 3 + 5 = \underline{\quad}$$

$$+ \quad \quad \quad 1 + 6 = \underline{\quad}$$

Answers



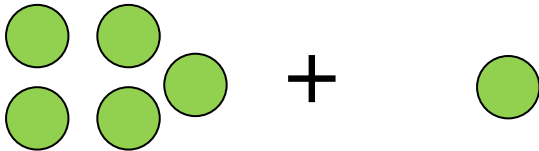
$$3 + 2 = 5$$



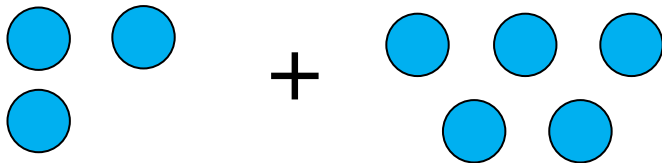
$$4 + 3 = 7$$



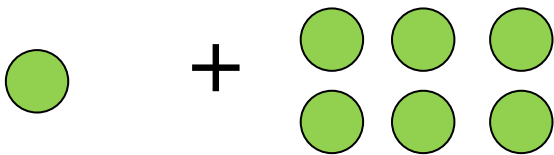
$$4 + 2 = 6$$



$$5 + 1 = 6$$



$$3 + 5 = 8$$



$$1 + 6 = 7$$