
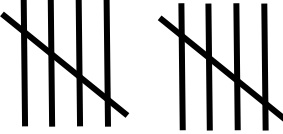



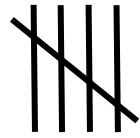


# Party decorations tally sheet

## Data and Graphing Worksheet

Jessica has made a tally sheet for her party.  
Write the totals and answer the questions.

Decoration	Tally marks	Total
 <b>Balloons</b>		
 <b>Party hats</b>		
 <b>Banners</b>		


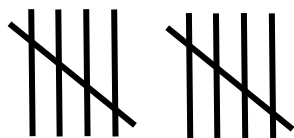




1. How many balloons are there?

2. How many party hats are there?

3. What item does Jessica have the fewest of?

4. What item does Jessica have the most of?

## Answers

Decoration	Tally marks	Total
 <b>Balloons</b>		<b>10</b>
 <b>Party hats</b>		<b>13</b>
 <b>Banners</b>		<b>7</b>

1. How many balloons are there?

**10**

2. How many party hats are there?

**13**

3. What item does Jessica have the fewest of?

**Banners**

4. What item does Jessica have the most of?

**Party hats**