













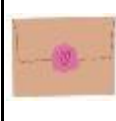









# Greeting cards pictograph

Data and Graphing Worksheet

Anna made greeting cards for her friends from Monday to Friday. Write the number of cards each day inside the box.

**Number of greeting cards made by Anna**

<b>Monday</b>						
<b>Tuesday</b>						
<b>Wednesday</b>						
<b>Thursday</b>						
<b>Friday</b>						

 = 1 card

How many greeting cards did Anna make each day?

**Monday**

**Tuesday**





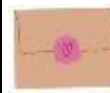









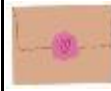






**Wednesday**


**Thursday**

**Friday**

## Answers

*Number of greeting cards made by Anna*

<b>Monday</b>						
<b>Tuesday</b>						
<b>Wednesday</b>						
<b>Thursday</b>						
<b>Friday</b>						

 = 1 card

How many greeting cards did Anna make each day?

<b>Monday</b>	<b>5</b>
<b>Tuesday</b>	<b>4</b>
<b>Wednesday</b>	<b>6</b>

<b>Thursday</b>	<b>1</b>
<b>Friday</b>	<b>5</b>